

Seminari 1

MATEMATIČKE METODE ZA INFORMATIČARE

Damir Horvat

FOI, Varaždin

Sadržaj

Oznake

prvi zadatak

drugi zadatak

treći zadatak

četvrti zadatak

peti zadatak


Dijeljenje dužine u zadanom omjeru

Oznake


Oznake

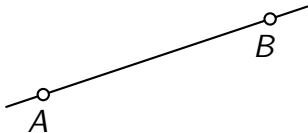
- AB

Oznake


- AB  pravac kroz točke A i B


Oznake

- AB  pravac kroz točke A i B




Oznake


- AB  pravac kroz točke A i B




- \overline{AB}

Oznake


- AB  pravac kroz točke A i B




- \overline{AB}  dužina čiji su krajevi točke A i B

Oznake

- AB ←~~~~ pravac kroz točke A i B




- \overline{AB} ←~~~~ dužina čiji su krajevi točke A i B

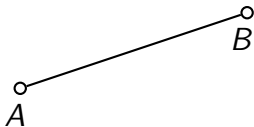


Oznake

- AB ←~~~~ pravac kroz točke A i B




- \overline{AB} ←~~~~ dužina čiji su krajevi točke A i B



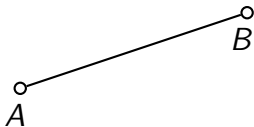
- $|AB|$

Oznake

- AB ←~~~~ pravac kroz točke A i B




- \overline{AB} ←~~~~ dužina čiji su krajevi točke A i B




- $|AB|$ ←~~~~ duljina dužine \overline{AB}

Oznake

- AB ←~~~~ pravac kroz točke A i B



- \overline{AB} ←~~~~ dužina čiji su krajevi točke A i B

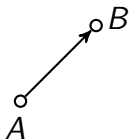


- $|AB|$ ←~~~~ duljina dužine \overline{AB} (nenegativni realni broj)

• \overrightarrow{AB}

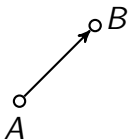
- \overrightarrow{AB} orijentirana dužina čiji početak je točka A , a kraj točka B

- \overrightarrow{AB} orijentirana dužina čiji početak je točka A , a kraj točka B



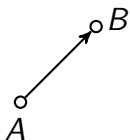
orijentirana
dužina \overrightarrow{AB}

- \overrightarrow{AB} ~~← w w w w~~ orijentirana dužina čiji početak je točka A , a kraj točka B
- $[\overrightarrow{AB}]$



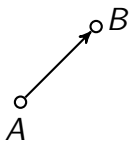
orijentirana
dužina \overrightarrow{AB}

- \overrightarrow{AB} ← orijentirana dužina čiji početak je točka A , a kraj točka B
- $[\overrightarrow{AB}]$ ← vektor čiji reprezentant je orijentirana dužina \overrightarrow{AB}

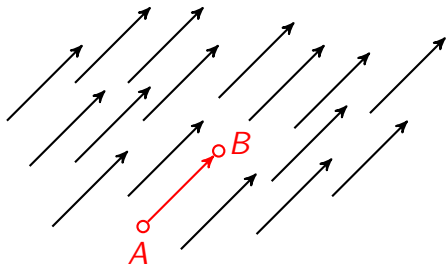


orijentirana
dužina \overrightarrow{AB}

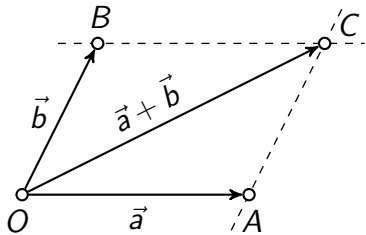
- \overrightarrow{AB} ← orijentirana dužina čiji početak je točka A , a kraj točka B
- $[\overrightarrow{AB}]$ ← vektor čiji reprezentant je orijentirana dužina \overrightarrow{AB}

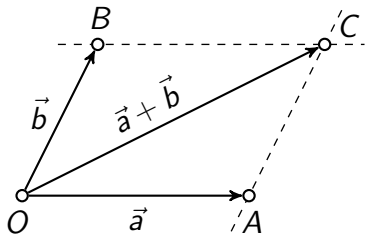


orijentirana
dužina \overrightarrow{AB}

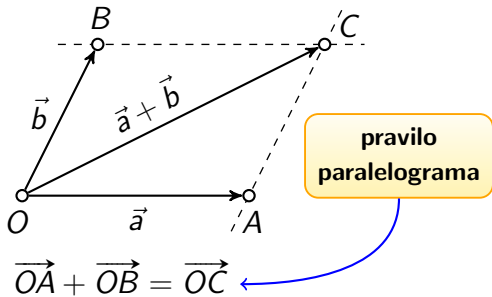


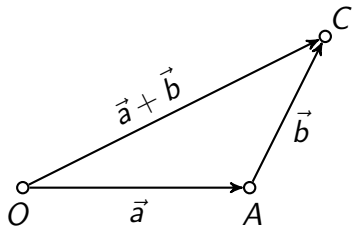
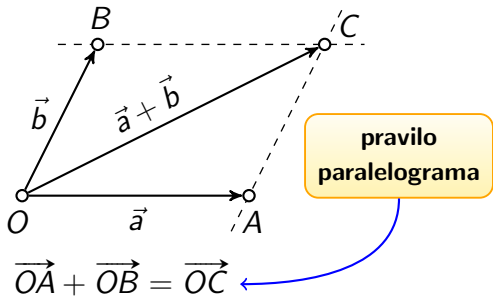
vektor $[\overrightarrow{AB}]$

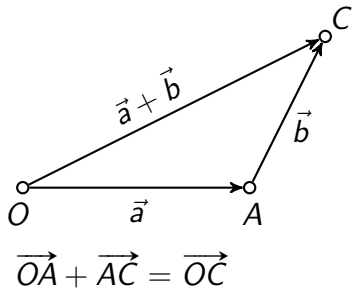
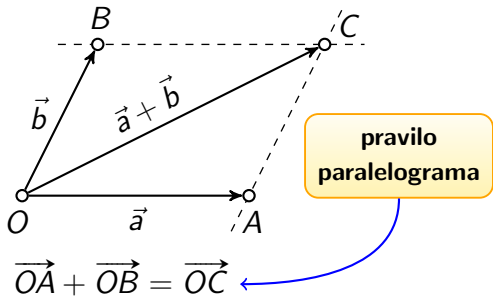


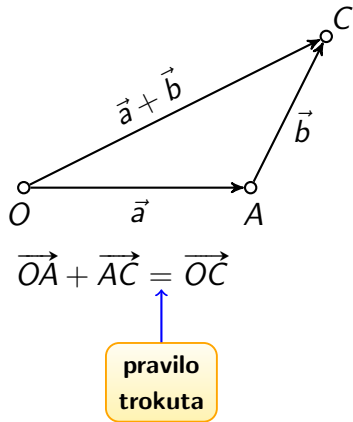
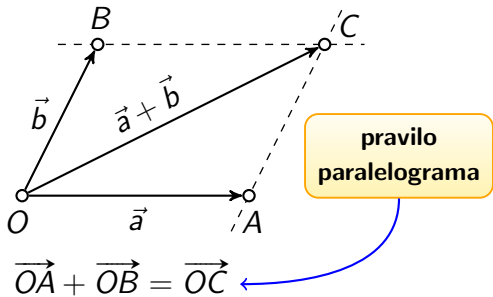


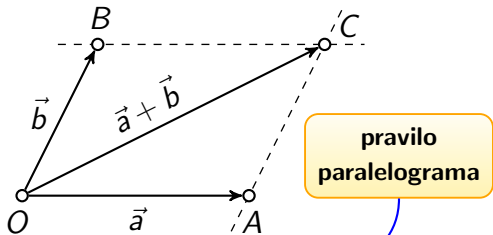
$$\vec{OA} + \vec{OB} = \vec{OC}$$



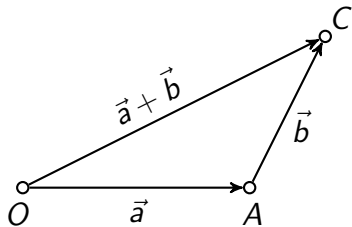






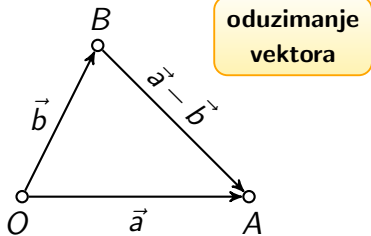


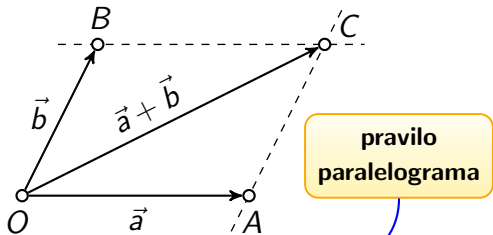
$$\vec{OA} + \vec{OB} = \vec{OC}$$



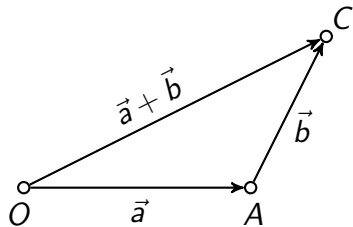
$$\vec{OA} + \vec{AC} = \vec{OC}$$

pravilo trokuta



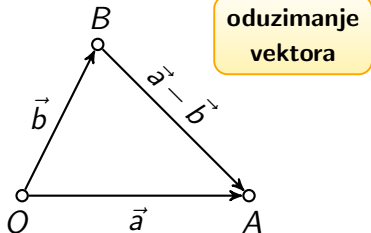


$$\vec{OA} + \vec{OB} = \vec{OC}$$

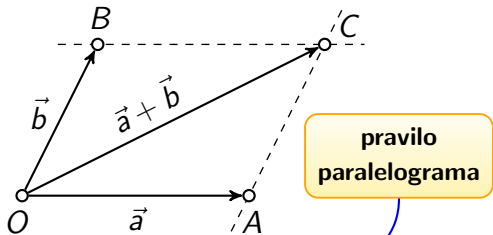


$$\vec{OA} + \vec{AC} = \vec{OC}$$

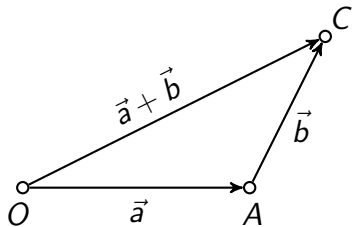
pravilo
trokuta



$$\vec{OA} - \vec{OB} = \vec{BA}$$

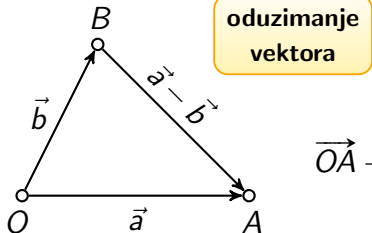


$$\vec{OA} + \vec{OB} = \vec{OC}$$



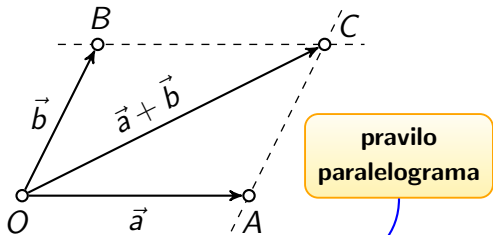
$$\vec{OA} + \vec{AC} = \vec{OC}$$

pravilo trokuta

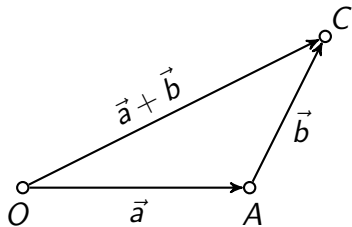


$$\vec{OA} - \vec{OB} =$$

$$\vec{OA} - \vec{OB} = \vec{BA}$$

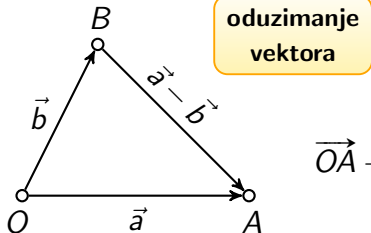


$$\vec{OA} + \vec{OB} = \vec{OC}$$



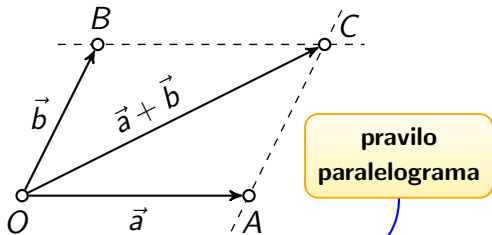
$$\vec{OA} + \vec{AC} = \vec{OC}$$

pravilo
trokuta

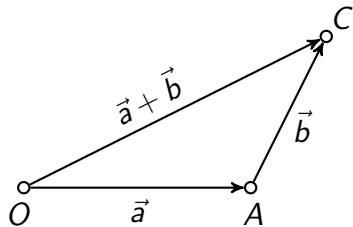


$$\vec{OA} - \vec{OB} = \vec{OA} + \vec{BO} =$$

$$\vec{OA} - \vec{OB} = \vec{BA}$$

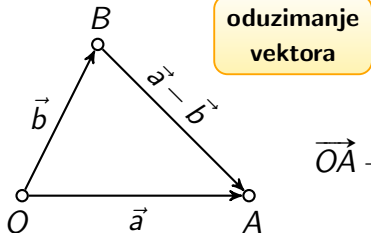


$$\vec{OA} + \vec{OB} = \vec{OC}$$



$$\vec{OA} + \vec{AC} = \vec{OC}$$

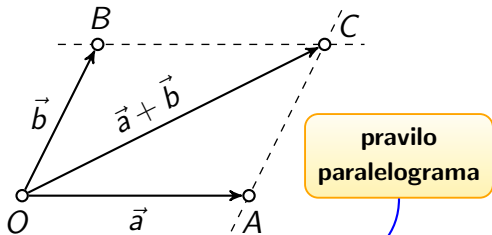
pravilo
trokuta



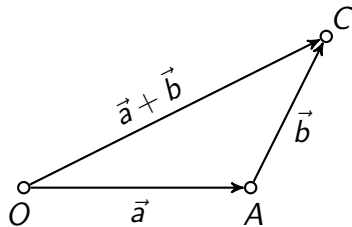
$$\vec{OA} - \vec{OB} = \vec{BA}$$

$$\vec{OA} - \vec{OB} = \vec{OA} + \vec{BO} =$$

komutativnost
zbrajanja vektora

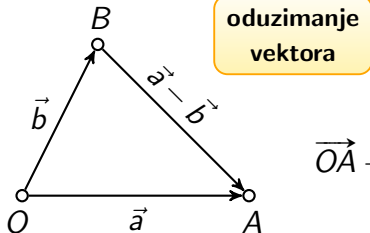


$$\vec{OA} + \vec{OB} = \vec{OC}$$



$$\vec{OA} + \vec{AC} = \vec{OC}$$

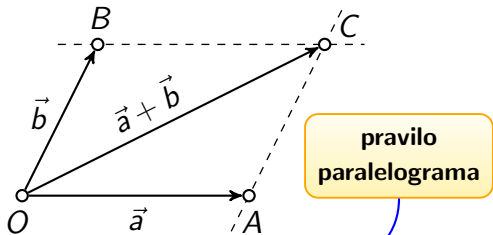
pravilo
trokuta



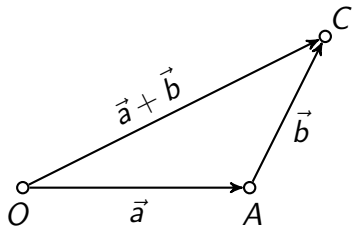
$$\vec{OA} - \vec{OB} = \vec{BA}$$

$$\vec{OA} - \vec{OB} = \vec{OA} + \vec{BO} = \vec{BO} + \vec{OA}$$

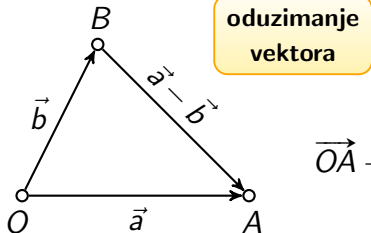
komutativnost
zbrajanja vektora



$$\vec{OA} + \vec{OB} = \vec{OC}$$



$$\vec{OA} + \vec{AC} = \vec{OC}$$



$$\vec{OA} - \vec{OB} = \vec{BA}$$

$$\vec{OA} - \vec{OB} = \vec{OA} + \vec{BO} = \vec{BO} + \vec{OA} = \vec{BA}$$

komutativnost
zbrajanja vektora

prvi zadatak

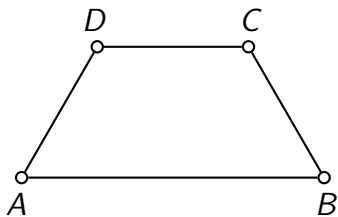
Zadatak 1

Točke A, B, C i D su redom vrhovi jednakokračnog trapeza kojemu je duljina kraka jednaka d i kojemu su duljine osnovica $|AB| = 2d$ i $|CD| = d$.

- Nacrtajte vektor $\vec{v} = \frac{1}{2}\overrightarrow{AB} - \overrightarrow{CB}$.
- Kolika je norma (duljina) vektora \vec{v} ?

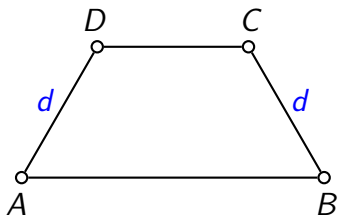
Rješenje

a)



Rješenje

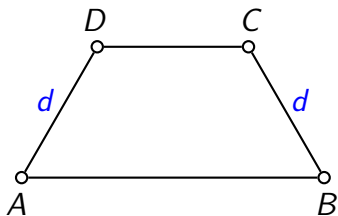
a)



$$|AD| = |BC| = d$$

Rješenje

a)

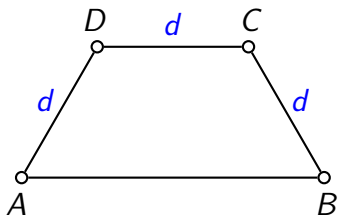


$$|AD| = |BC| = d$$

$$|AB| = 2d$$

Rješenje

a)

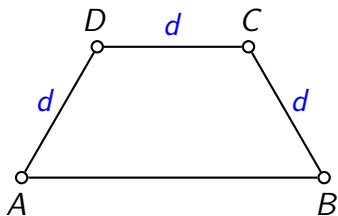


$$|AD| = |BC| = d$$

$$|AB| = 2d, \quad |CD| = d$$

Rješenje

a)



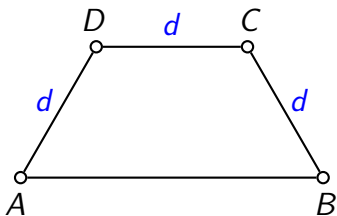
$$|AD| = |BC| = d$$

$$|AB| = 2d, \quad |CD| = d$$

$$\vec{v} = \frac{1}{2}\vec{AB} - \vec{CB}$$

Rješenje

a)



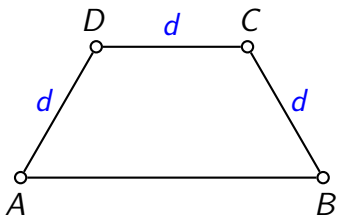
$$|AD| = |BC| = d$$

$$|AB| = 2d, \quad |CD| = d$$

$$\vec{v} = \frac{1}{2}\vec{AB} - \vec{CB} =$$

Rješenje

a)



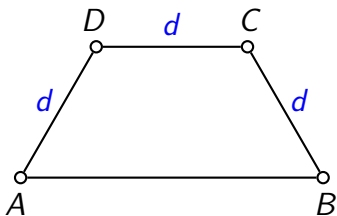
$$|AD| = |BC| = d$$

$$|AB| = 2d, \quad |CD| = d$$

$$\vec{v} = \frac{1}{2}\vec{AB} - \vec{CB} = \frac{1}{2}\vec{AB}$$

Rješenje

a)



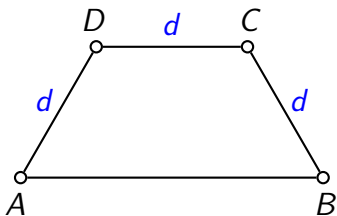
$$|AD| = |BC| = d$$

$$|AB| = 2d, \quad |CD| = d$$

$$\vec{v} = \frac{1}{2}\vec{AB} - \vec{CB} = \frac{1}{2}\vec{AB} + \vec{BC}$$

Rješenje

a)



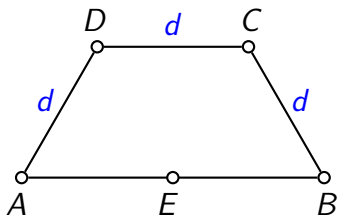
$$|AD| = |BC| = d$$

$$|AB| = 2d, \quad |CD| = d$$

$$\vec{v} = \frac{1}{2}\vec{AB} - \vec{CB} = \frac{1}{2}\vec{AB} + \vec{BC} =$$

Rješenje

a)



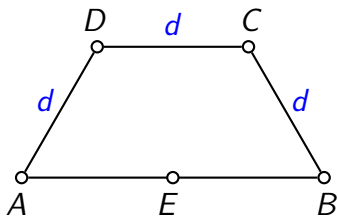
$$|AD| = |BC| = d$$

$$|AB| = 2d, \quad |CD| = d$$

$$\vec{v} = \frac{1}{2}\vec{AB} - \vec{CB} = \frac{1}{2}\vec{AB} + \vec{BC} =$$

Rješenje

a)



$$|AD| = |BC| = d$$

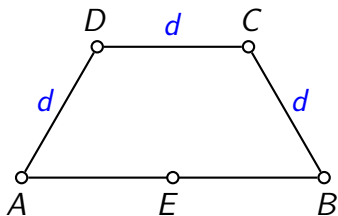
$$|AB| = 2d, \quad |CD| = d$$

$$|AE| = |BE|$$

$$\vec{v} = \frac{1}{2}\vec{AB} - \vec{CB} = \frac{1}{2}\vec{AB} + \vec{BC} =$$

Rješenje

a)



$$|AD| = |BC| = d$$

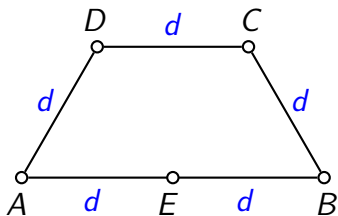
$$|AB| = 2d, \quad |CD| = d$$

$$|AE| = |BE| = d$$

$$\vec{v} = \frac{1}{2}\vec{AB} - \vec{CB} = \frac{1}{2}\vec{AB} + \vec{BC} =$$

Rješenje

a)



$$|AD| = |BC| = d$$

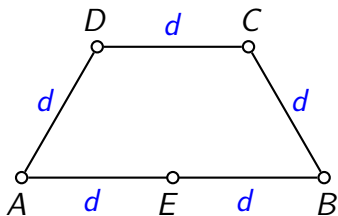
$$|AB| = 2d, \quad |CD| = d$$

$$|AE| = |BE| = d$$

$$\vec{v} = \frac{1}{2}\vec{AB} - \vec{CB} = \frac{1}{2}\vec{AB} + \vec{BC} =$$

Rješenje

a)



$$|AD| = |BC| = d$$

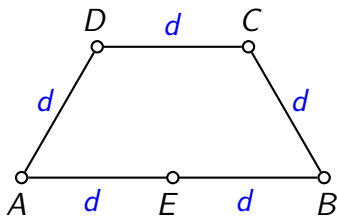
$$|AB| = 2d, \quad |CD| = d$$

$$|AE| = |BE| = d$$

$$\vec{v} = \frac{1}{2}\vec{AB} - \vec{CB} = \frac{1}{2}\vec{AB} + \vec{BC} = \vec{AE}$$

Rješenje

a)



$$|AD| = |BC| = d$$

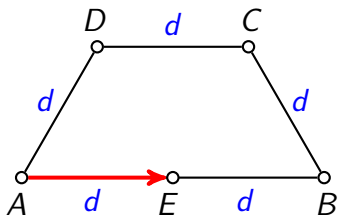
$$|AB| = 2d, \quad |CD| = d$$

$$|AE| = |BE| = d$$

$$\vec{v} = \frac{1}{2}\vec{AB} - \vec{CB} = \frac{1}{2}\vec{AB} + \vec{BC} = \vec{AE} + \vec{BC}$$

Rješenje

a)



$$|AD| = |BC| = d$$

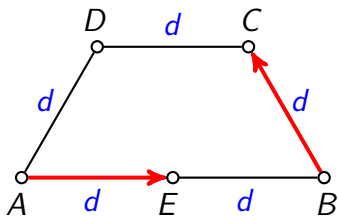
$$|AB| = 2d, \quad |CD| = d$$

$$|AE| = |BE| = d$$

$$\vec{v} = \frac{1}{2}\vec{AB} - \vec{CB} = \frac{1}{2}\vec{AB} + \vec{BC} = \vec{AE} + \vec{BC}$$

Rješenje

a)



$$|AD| = |BC| = d$$

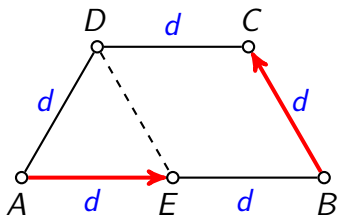
$$|AB| = 2d, \quad |CD| = d$$

$$|AE| = |BE| = d$$

$$\vec{v} = \frac{1}{2}\vec{AB} - \vec{CB} = \frac{1}{2}\vec{AB} + \vec{BC} = \vec{AE} + \vec{BC}$$

Rješenje

a)



$$|AD| = |BC| = d$$

$$|AB| = 2d, \quad |CD| = d$$

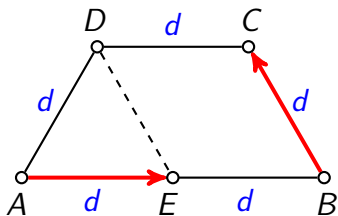
$$|AE| = |BE| = d$$

$$\vec{v} = \frac{1}{2}\vec{AB} - \vec{CB} = \frac{1}{2}\vec{AB} + \vec{BC} = \vec{AE} + \vec{BC}$$

Rješenje

$$EB \parallel DC,$$

a)



$$|AD| = |BC| = d$$

$$|AB| = 2d, \quad |CD| = d$$

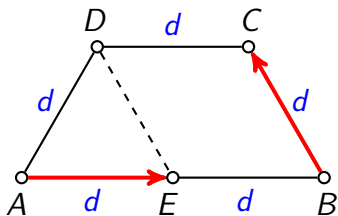
$$|AE| = |BE| = d$$

$$\vec{v} = \frac{1}{2}\vec{AB} - \vec{CB} = \frac{1}{2}\vec{AB} + \vec{BC} = \vec{AE} + \vec{BC}$$

Rješenje

$$EB \parallel DC, \quad |EB| = |DC|$$

a)



$$|AD| = |BC| = d$$

$$|AB| = 2d, \quad |CD| = d$$

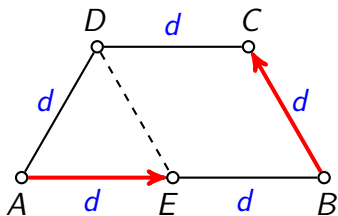
$$|AE| = |BE| = d$$

$$\vec{v} = \frac{1}{2}\vec{AB} - \vec{CB} = \frac{1}{2}\vec{AB} + \vec{BC} = \vec{AE} + \vec{BC}$$

Rješenje

$EB \parallel DC, |EB| = |DC| \implies EBCD$ je paralelogram

a)



$$|AD| = |BC| = d$$

$$|AB| = 2d, \quad |CD| = d$$

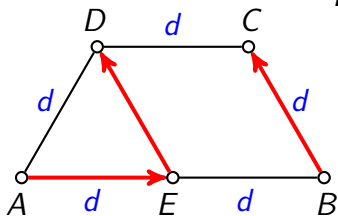
$$|AE| = |BE| = d$$

$$\vec{v} = \frac{1}{2}\vec{AB} - \vec{CB} = \frac{1}{2}\vec{AB} + \vec{BC} = \vec{AE} + \vec{BC}$$

Rješenje

$EB \parallel DC, |EB| = |DC| \implies EBCD$ je paralelogram

a)



$$\vec{BC} = \vec{ED}$$

$$|AD| = |BC| = d$$

$$|AB| = 2d, \quad |CD| = d$$

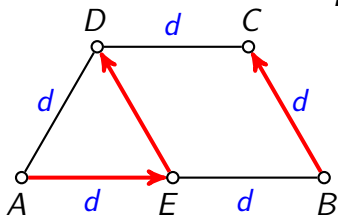
$$|AE| = |BE| = d$$

$$\vec{v} = \frac{1}{2}\vec{AB} - \vec{CB} = \frac{1}{2}\vec{AB} + \vec{BC} = \vec{AE} + \vec{BC}$$

Rješenje

$EB \parallel DC, |EB| = |DC| \implies EBCD$ je paralelogram

a)



$$\vec{BC} = \vec{ED}$$

$$|AD| = |BC| = d$$

$$|AB| = 2d, \quad |CD| = d$$

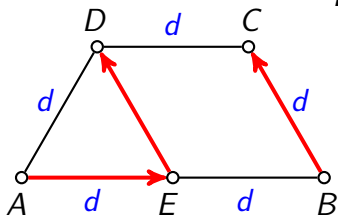
$$|AE| = |BE| = d$$

$$\vec{v} = \frac{1}{2}\vec{AB} - \vec{CB} = \frac{1}{2}\vec{AB} + \vec{BC} = \vec{AE} + \vec{BC} =$$

Rješenje

$EB \parallel DC, |EB| = |DC| \implies EBCD$ je paralelogram

a)



$$\vec{BC} = \vec{ED}$$

$$|AD| = |BC| = d$$

$$|AB| = 2d, \quad |CD| = d$$

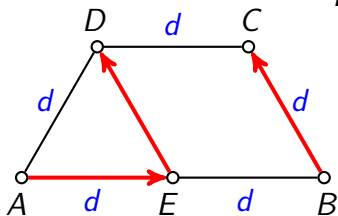
$$|AE| = |BE| = d$$

$$\vec{v} = \frac{1}{2}\vec{AB} - \vec{CB} = \frac{1}{2}\vec{AB} + \vec{BC} = \vec{AE} + \vec{BC} = \vec{AE}$$

Rješenje

$EB \parallel DC, |EB| = |DC| \implies EBCD$ je paralelogram

a)



$$\vec{BC} = \vec{ED}$$

$$|AD| = |BC| = d$$

$$|AB| = 2d, \quad |CD| = d$$

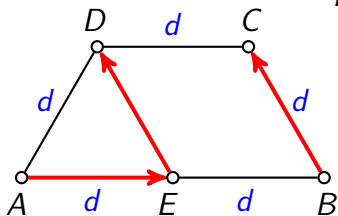
$$|AE| = |BE| = d$$

$$\vec{v} = \frac{1}{2}\vec{AB} - \vec{CB} = \frac{1}{2}\vec{AB} + \vec{BC} = \vec{AE} + \vec{BC} = \vec{AE} + \vec{ED}$$

Rješenje

$EB \parallel DC, |EB| = |DC| \implies EBCD$ je paralelogram

a)



$$\vec{BC} = \vec{ED}$$

$$|AD| = |BC| = d$$

$$|AB| = 2d, \quad |CD| = d$$

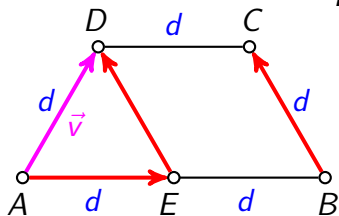
$$|AE| = |BE| = d$$

$$\vec{v} = \frac{1}{2}\vec{AB} - \vec{CB} = \frac{1}{2}\vec{AB} + \vec{BC} = \vec{AE} + \vec{BC} = \vec{AE} + \vec{ED} = \vec{AD}$$

Rješenje

$EB \parallel DC, |EB| = |DC| \implies EBCD$ je paralelogram

a)



$$\vec{BC} = \vec{ED}$$

$$|AD| = |BC| = d$$

$$|AB| = 2d, \quad |CD| = d$$

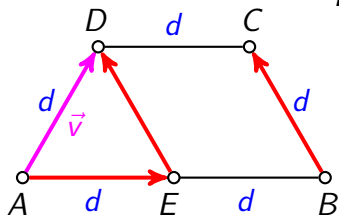
$$|AE| = |BE| = d$$

$$\vec{v} = \frac{1}{2}\vec{AB} - \vec{CB} = \frac{1}{2}\vec{AB} + \vec{BC} = \vec{AE} + \vec{BC} = \vec{AE} + \vec{ED} = \vec{AD}$$

Rješenje

$EB \parallel DC, |EB| = |DC| \implies EBCD$ je paralelogram

a)



$$\vec{BC} = \vec{ED}$$

$$|AD| = |BC| = d$$

$$|AB| = 2d, \quad |CD| = d$$

$$|AE| = |BE| = d$$

$$\vec{v} = \frac{1}{2}\vec{AB} - \vec{CB} = \frac{1}{2}\vec{AB} + \vec{BC} = \vec{AE} + \vec{BC} = \vec{AE} + \vec{ED} = \vec{AD}$$

b) $|\vec{v}| = d$

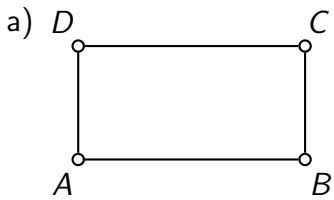
drugi zadatak

Zadatak 2

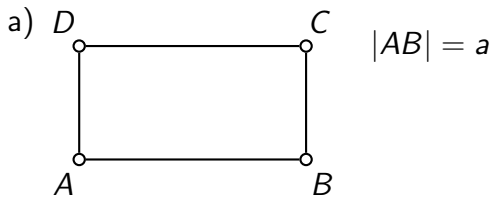
Točke A, B, C i D su redom vrhovi pravokutnika kojemu su duljine susjednih stranica $|AB| = a$ i $|AD| = b$.

- Nacrtajte vektor $\vec{AE} = \vec{AB} - \vec{BC}$.
- Kolika je norma vektora \vec{AE} ?
- Nacrtajte vektor $\vec{AF} = \vec{AB} - \vec{AC}$.
- Kolika je norma vektora \vec{AF} ?

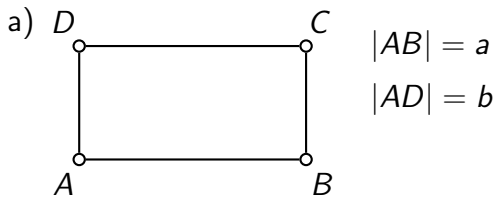
Rješenje



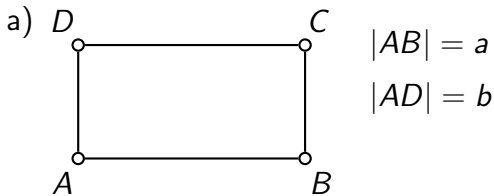
Rješenje



Rješenje

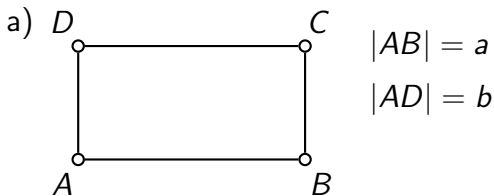


Rješenje



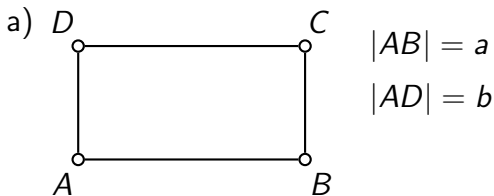
$$\vec{AE} = \vec{AB} - \vec{BC}$$

Rješenje



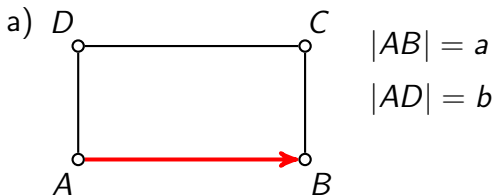
$$\vec{AE} = \vec{AB} - \vec{BC} = \vec{AB}$$

Rješenje



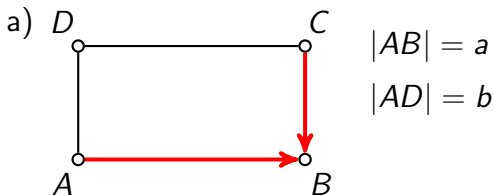
$$\vec{AE} = \vec{AB} - \vec{BC} = \vec{AB} + \vec{CB}$$

Rješenje



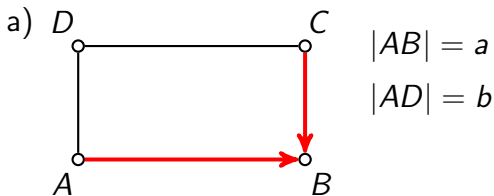
$$\vec{AE} = \vec{AB} - \vec{BC} = \vec{AB} + \vec{CB}$$

Rješenje



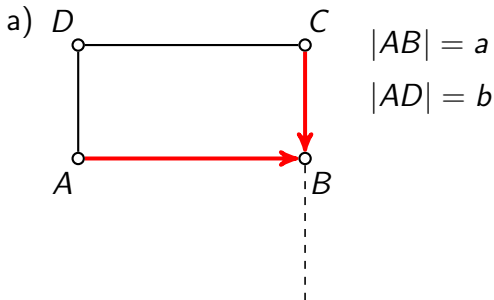
$$\vec{AE} = \vec{AB} - \vec{BC} = \vec{AB} + \vec{CB}$$

Rješenje



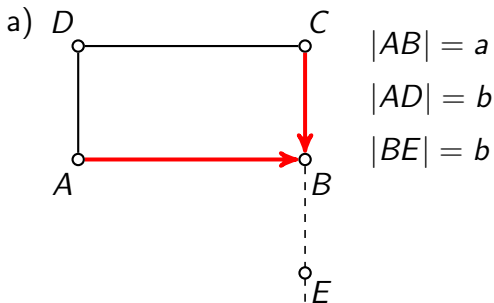
$$\begin{aligned}\vec{AE} &= \vec{AB} - \vec{BC} = \vec{AB} + \vec{CB} = \\ &= \vec{AB} +\end{aligned}$$

Rješenje



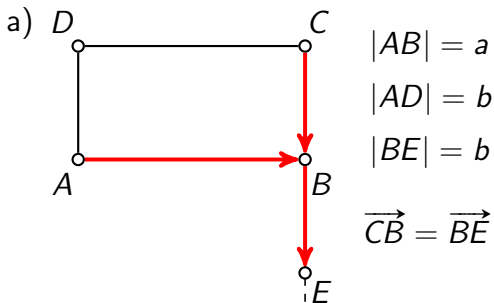
$$\begin{aligned}\vec{AE} &= \vec{AB} - \vec{BC} = \vec{AB} + \vec{CB} = \\ &= \vec{AB} +\end{aligned}$$

Rješenje



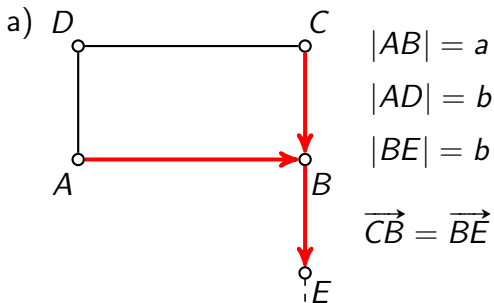
$$\begin{aligned}\vec{AE} &= \vec{AB} - \vec{BC} = \vec{AB} + \vec{CB} = \\ &= \vec{AB} +\end{aligned}$$

Rješenje



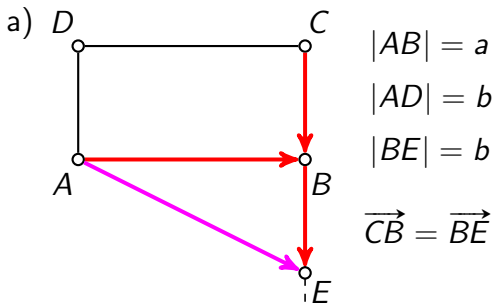
$$\begin{aligned}\vec{AE} &= \vec{AB} - \vec{BC} = \vec{AB} + \vec{CB} = \\ &= \vec{AB} +\end{aligned}$$

Rješenje



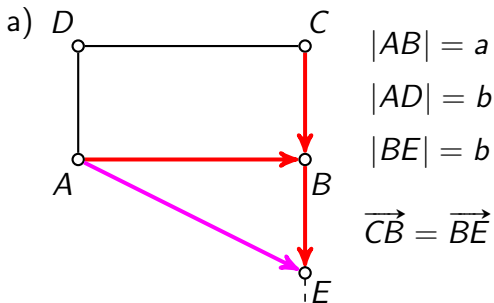
$$\begin{aligned}\overrightarrow{AE} &= \overrightarrow{AB} - \overrightarrow{BC} = \overrightarrow{AB} + \overrightarrow{CB} = \\ &= \overrightarrow{AB} + \overrightarrow{BE}\end{aligned}$$

Rješenje



$$\begin{aligned}\vec{AE} &= \vec{AB} - \vec{BC} = \vec{AB} + \vec{CB} = \\ &= \vec{AB} + \vec{BE}\end{aligned}$$

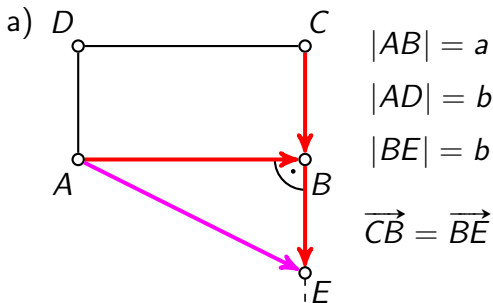
Rješenje



$$\begin{aligned}\vec{AE} &= \vec{AB} - \vec{BC} = \vec{AB} + \vec{CB} = \\ &= \vec{AB} + \vec{BE}\end{aligned}$$

b) $|\vec{AE}| =$

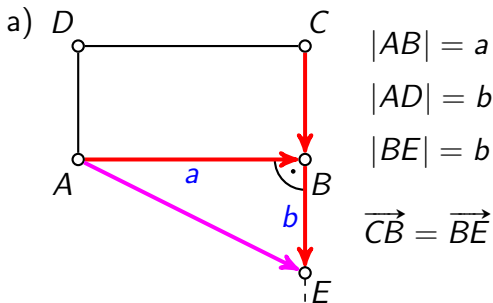
Rješenje



$$\begin{aligned}\vec{AE} &= \vec{AB} - \vec{BC} = \vec{AB} + \vec{CB} = \\ &= \vec{AB} + \vec{BE}\end{aligned}$$

b) $|\vec{AE}| =$

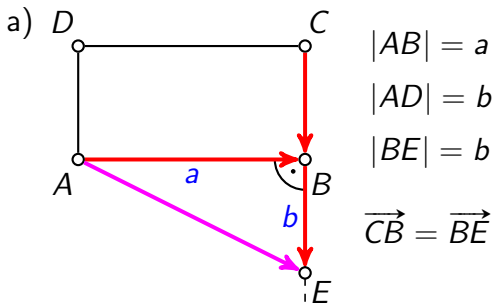
Rješenje



$$\begin{aligned}\vec{AE} &= \vec{AB} - \vec{BC} = \vec{AB} + \vec{CB} = \\ &= \vec{AB} + \vec{BE}\end{aligned}$$

b) $|\vec{AE}| =$

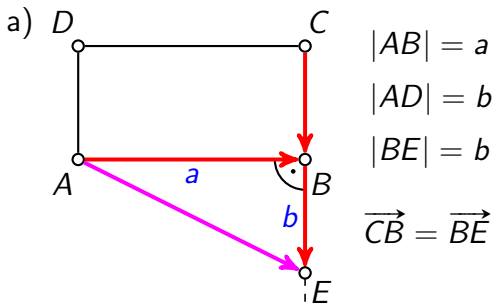
Rješenje



$$\begin{aligned}\vec{AE} &= \vec{AB} - \vec{BC} = \vec{AB} + \vec{CB} = \\ &= \vec{AB} + \vec{BE}\end{aligned}$$

b) $|\vec{AE}| = \sqrt{a^2 + b^2}$

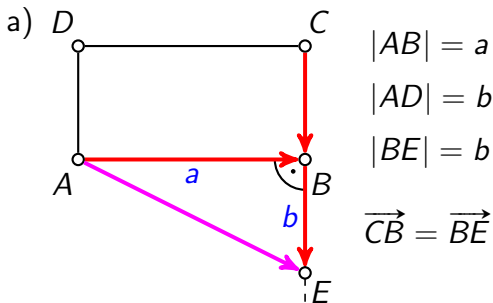
Rješenje



$$\begin{aligned}\vec{AE} &= \vec{AB} - \vec{BC} = \vec{AB} + \vec{CB} = \\ &= \vec{AB} + \vec{BE}\end{aligned}$$

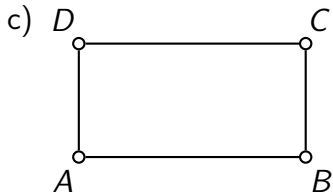
b) $|\vec{AE}| = \sqrt{a^2 + b^2}$

Rješenje

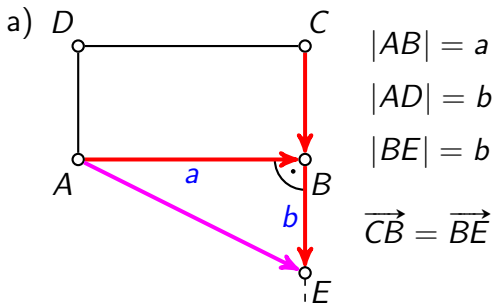


$$\begin{aligned}\vec{AE} &= \vec{AB} - \vec{BC} = \vec{AB} + \vec{CB} = \\ &= \vec{AB} + \vec{BE}\end{aligned}$$

b) $|\vec{AE}| = \sqrt{a^2 + b^2}$

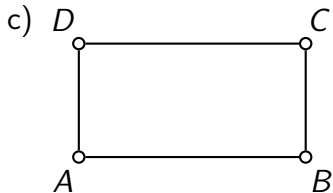


Rješenje



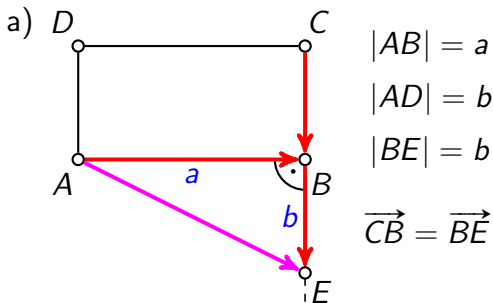
$$\begin{aligned}\vec{AE} &= \vec{AB} - \vec{BC} = \vec{AB} + \vec{CB} = \\ &= \vec{AB} + \vec{BE}\end{aligned}$$

b) $|\vec{AE}| = \sqrt{a^2 + b^2}$



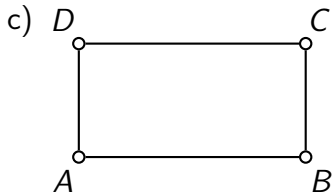
$$\vec{AF} = \vec{AB} - \vec{AC}$$

Rješenje



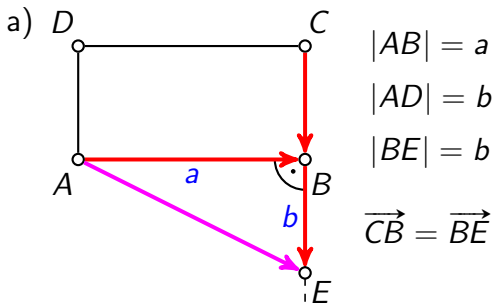
$$\begin{aligned}\overrightarrow{AE} &= \overrightarrow{AB} - \overrightarrow{BC} = \overrightarrow{AB} + \overrightarrow{CB} = \\ &= \overrightarrow{AB} + \overrightarrow{BE}\end{aligned}$$

b) $|\overrightarrow{AE}| = \sqrt{a^2 + b^2}$



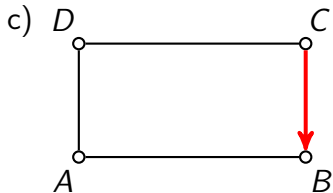
$$\overrightarrow{AF} = \overrightarrow{AB} - \overrightarrow{AC} = \overrightarrow{CB}$$

Rješenje



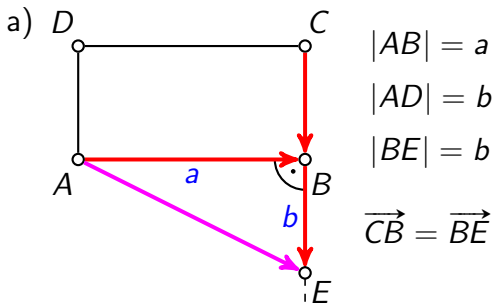
$$\begin{aligned}\vec{AE} &= \vec{AB} - \vec{BC} = \vec{AB} + \vec{CB} = \\ &= \vec{AB} + \vec{BE}\end{aligned}$$

b) $|\vec{AE}| = \sqrt{a^2 + b^2}$



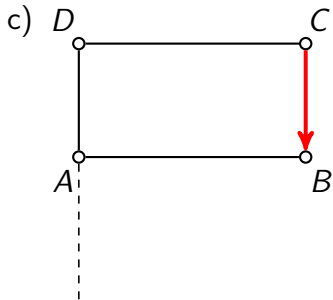
$$\vec{AF} = \vec{AB} - \vec{AC} = \vec{CB}$$

Rješenje



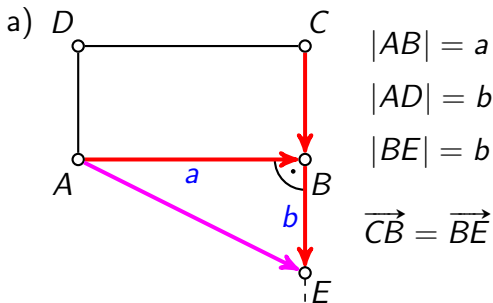
$$\begin{aligned}\vec{AE} &= \vec{AB} - \vec{BC} = \vec{AB} + \vec{CB} = \\ &= \vec{AB} + \vec{BE}\end{aligned}$$

b) $|\vec{AE}| = \sqrt{a^2 + b^2}$



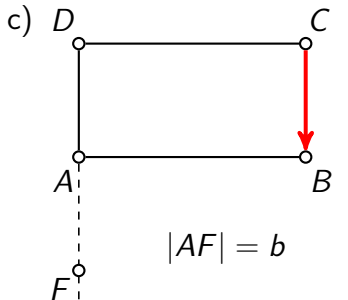
$$\vec{AF} = \vec{AB} - \vec{AC} = \vec{CB}$$

Rješenje



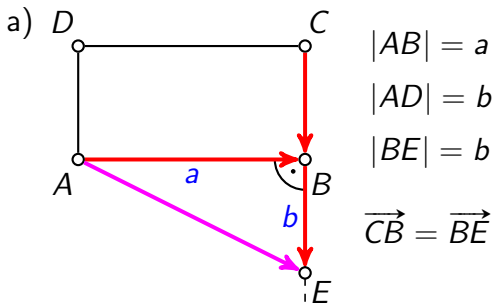
$$\begin{aligned}\vec{AE} &= \vec{AB} - \vec{BC} = \vec{AB} + \vec{CB} = \\ &= \vec{AB} + \vec{BE}\end{aligned}$$

b) $|\vec{AE}| = \sqrt{a^2 + b^2}$



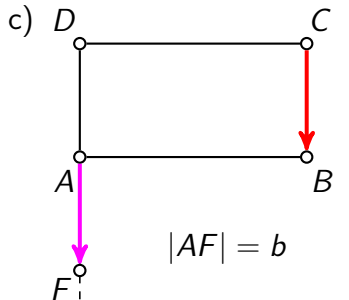
$$\vec{AF} = \vec{AB} - \vec{AC} = \vec{CB}$$

Rješenje



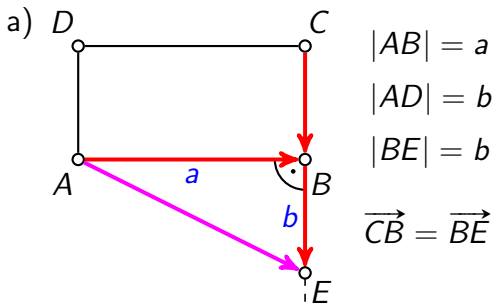
$$\begin{aligned}\vec{AE} &= \vec{AB} - \vec{BC} = \vec{AB} + \vec{CB} = \\ &= \vec{AB} + \vec{BE}\end{aligned}$$

b) $|\vec{AE}| = \sqrt{a^2 + b^2}$



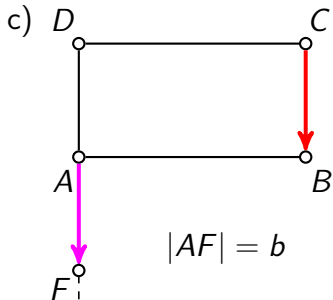
$$\vec{AF} = \vec{AB} - \vec{AC} = \vec{CB}$$

Rješenje



$$\begin{aligned}\vec{AE} &= \vec{AB} - \vec{BC} = \vec{AB} + \vec{CB} = \\ &= \vec{AB} + \vec{BE}\end{aligned}$$

b) $|\vec{AE}| = \sqrt{a^2 + b^2}$



$$\vec{AF} = \vec{AB} - \vec{AC} = \vec{CB}$$

d) $|\vec{AF}| = b$

treći zadatak

Definicija kolinearnih vektora

Za dva vektora iz V^3 kažemo da su kolinearni ako imaju isti smjer. Po dogovoru je nulvektor kolinearan sa svakim vektorom iz V^3 .

Definicija kolinearnih vektora

Za dva vektora iz V^3 kažemo da su kolinearni ako imaju isti smjer. Po dogovoru je nulvektor kolinearan sa svakim vektorom iz V^3 .

Iznimno važna propozicija

Neka su $\vec{a}, \vec{b} \in V^3$ različiti od nulvektora. Tada vrijedi:

$$\vec{a} \text{ i } \vec{b} \text{ imaju isti smjer} \Leftrightarrow \exists \lambda \in \mathbb{R}, \vec{b} = \lambda \vec{a}.$$

U tom je slučaju $\lambda \neq 0$ i vrijedi $\vec{a} = \frac{1}{\lambda} \vec{b}$. Nadalje, takav λ je jedinstven.

Zadatak 3

Dokažite da je srednjica trokuta paralelna s nasuprotnom stranicom trokuta i da je njezina duljina jednaka polovici duljine te stranice.

Zadatak 3

Dokažite da je srednjica trokuta paralelna s nasuprotnom stranicom trokuta i da je njezina duljina jednaka polovici duljine te stranice.

Rješenje

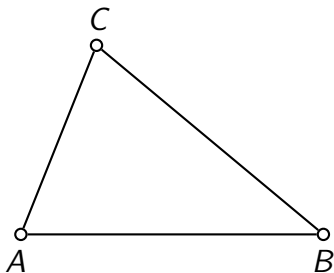
Srednjica trokuta je dužina koja spaja polovišta dviju stranica trokuta.

Zadatak 3

Dokažite da je srednjica trokuta paralelna s nasuprotnom stranicom trokuta i da je njezina duljina jednaka polovici duljine te stranice.

Rješenje

Srednjica trokuta je dužina koja spaja polovišta dviju stranica trokuta.

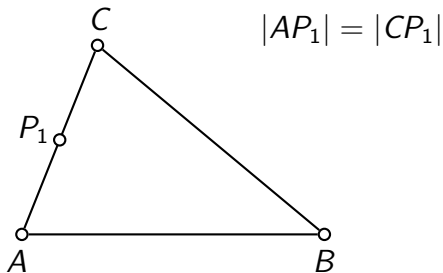


Zadatak 3

Dokažite da je srednjica trokuta paralelna s nasuprotnom stranicom trokuta i da je njezina duljina jednaka polovici duljine te stranice.

Rješenje

Srednjica trokuta je dužina koja spaja polovišta dviju stranica trokuta.

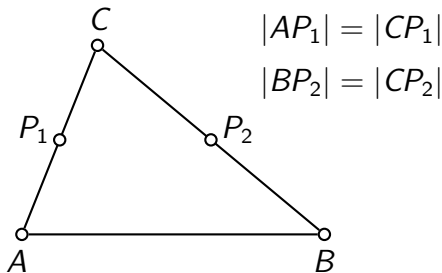


Zadatak 3

Dokažite da je srednjica trokuta paralelna s nasuprotnom stranicom trokuta i da je njezina duljina jednaka polovici duljine te stranice.

Rješenje

Srednjica trokuta je dužina koja spaja polovišta dviju stranica trokuta.

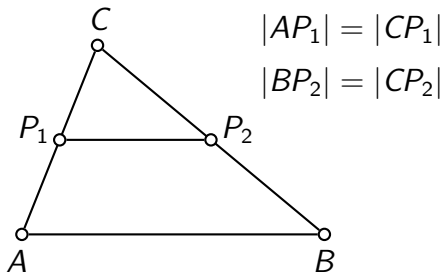


Zadatak 3

Dokažite da je srednjica trokuta paralelna s nasuprotnom stranicom trokuta i da je njezina duljina jednaka polovici duljine te stranice.

Rješenje

Srednjica trokuta je dužina koja spaja polovišta dviju stranica trokuta.

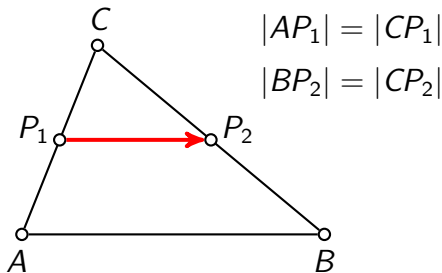


Zadatak 3

Dokažite da je srednjica trokuta paralelna s nasuprotnom stranicom trokuta i da je njezina duljina jednaka polovici duljine te stranice.

Rješenje

Srednjica trokuta je dužina koja spaja polovišta dviju stranica trokuta.

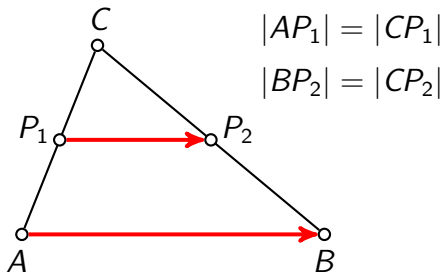


Zadatak 3

Dokažite da je srednjica trokuta paralelna s nasuprotnom stranicom trokuta i da je njezina duljina jednaka polovici duljine te stranice.

Rješenje

Srednjica trokuta je dužina koja spaja polovišta dviju stranica trokuta.

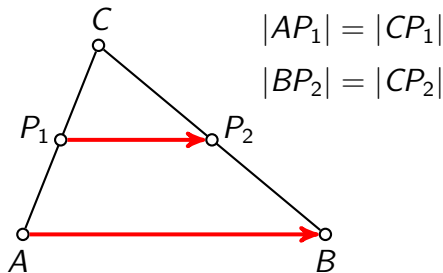


Zadatak 3

Dokažite da je srednjica trokuta paralelna s nasuprotnom stranicom trokuta i da je njezina duljina jednaka polovici duljine te stranice.

Rješenje

Srednjica trokuta je dužina koja spaja polovišta dviju stranica trokuta.



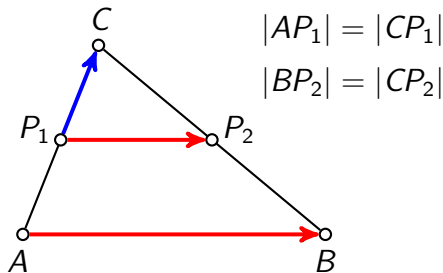
$$\overrightarrow{P_1P_2} =$$

Zadatak 3

Dokažite da je srednjica trokuta paralelna s nasuprotnom stranicom trokuta i da je njezina duljina jednaka polovici duljine te stranice.

Rješenje

Srednjica trokuta je dužina koja spaja polovišta dviju stranica trokuta.



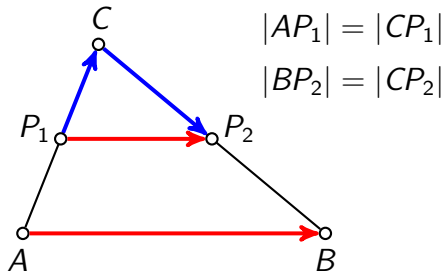
$$\overrightarrow{P_1P_2} = \overrightarrow{P_1C} +$$

Zadatak 3

Dokažite da je srednjica trokuta paralelna s nasuprotnom stranicom trokuta i da je njezina duljina jednaka polovici duljine te stranice.

Rješenje

Srednjica trokuta je dužina koja spaja polovišta dviju stranica trokuta.



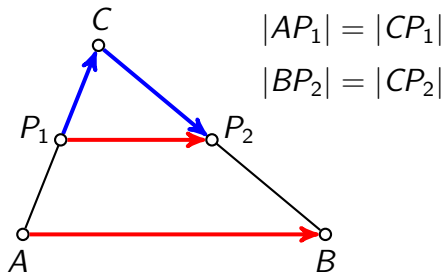
$$\overrightarrow{P_1P_2} = \overrightarrow{P_1C} + \overrightarrow{CP_2}$$

Zadatak 3

Dokažite da je srednjica trokuta paralelna s nasuprotnom stranicom trokuta i da je njezina duljina jednaka polovici duljine te stranice.

Rješenje

Srednjica trokuta je dužina koja spaja polovišta dviju stranica trokuta.



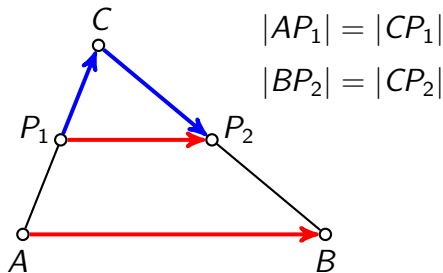
$$\overrightarrow{P_1P_2} = \overrightarrow{P_1C} + \overrightarrow{CP_2} = \frac{1}{2}\overrightarrow{AC}$$

Zadatak 3

Dokažite da je srednjica trokuta paralelna s nasuprotnom stranicom trokuta i da je njezina duljina jednaka polovici duljine te stranice.

Rješenje

Srednjica trokuta je dužina koja spaja polovišta dviju stranica trokuta.



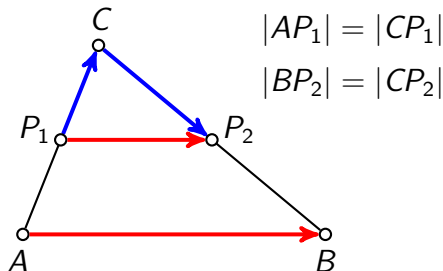
$$\overrightarrow{P_1P_2} = \overrightarrow{P_1C} + \overrightarrow{CP_2} = \frac{1}{2}\overrightarrow{AC} +$$

Zadatak 3

Dokažite da je srednjica trokuta paralelna s nasuprotnom stranicom trokuta i da je njezina duljina jednaka polovici duljine te stranice.

Rješenje

Srednjica trokuta je dužina koja spaja polovišta dviju stranica trokuta.



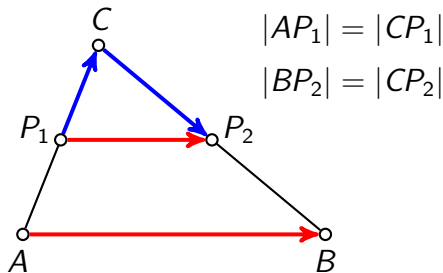
$$\overrightarrow{P_1P_2} = \overrightarrow{P_1C} + \overrightarrow{CP_2} = \frac{1}{2}\overrightarrow{AC} + \frac{1}{2}\overrightarrow{CB}$$

Zadatak 3

Dokažite da je srednjica trokuta paralelna s nasuprotnom stranicom trokuta i da je njezina duljina jednaka polovici duljine te stranice.

Rješenje

Srednjica trokuta je dužina koja spaja polovišta dviju stranica trokuta.



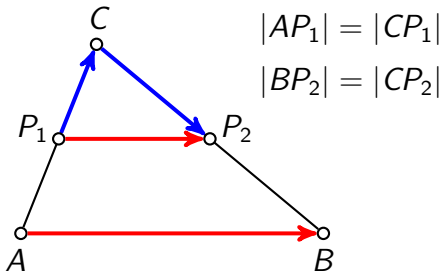
$$\overrightarrow{P_1P_2} = \overrightarrow{P_1C} + \overrightarrow{CP_2} = \frac{1}{2}\overrightarrow{AC} + \frac{1}{2}\overrightarrow{CB} = \frac{1}{2}(\overrightarrow{AC} + \overrightarrow{CB})$$

Zadatak 3

Dokažite da je srednjica trokuta paralelna s nasuprotnom stranicom trokuta i da je njezina duljina jednaka polovici duljine te stranice.

Rješenje

Srednjica trokuta je dužina koja spaja polovišta dviju stranica trokuta.



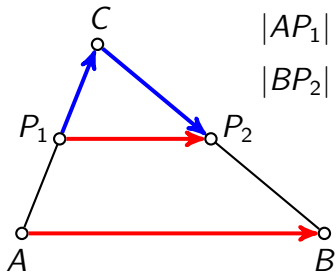
$$\overrightarrow{P_1P_2} = \overrightarrow{P_1C} + \overrightarrow{CP_2} = \frac{1}{2}\overrightarrow{AC} + \frac{1}{2}\overrightarrow{CB} = \frac{1}{2}(\overrightarrow{AC} + \overrightarrow{CB}) = \frac{1}{2}\overrightarrow{AB}$$

Zadatak 3

Dokažite da je srednjica trokuta paralelna s nasuprotnom stranicom trokuta i da je njezina duljina jednaka polovici duljine te stranice.

Rješenje

Srednjica trokuta je dužina koja spaja polovišta dviju stranica trokuta.



$$|AP_1| = |CP_1|$$

$$|BP_2| = |CP_2|$$

$$\overrightarrow{P_1P_2} = \frac{1}{2}\overrightarrow{AB}$$

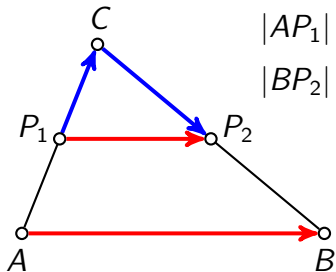
$$\overrightarrow{P_1P_2} = \overrightarrow{P_1C} + \overrightarrow{CP_2} = \frac{1}{2}\overrightarrow{AC} + \frac{1}{2}\overrightarrow{CB} = \frac{1}{2}(\overrightarrow{AC} + \overrightarrow{CB}) = \frac{1}{2}\overrightarrow{AB}$$

Zadatak 3

Dokažite da je srednjica trokuta paralelna s nasuprotnom stranicom trokuta i da je njezina duljina jednaka polovici duljine te stranice.

Rješenje

Srednjica trokuta je dužina koja spaja polovišta dviju stranica trokuta.



$$|AP_1| = |CP_1|$$

$$|BP_2| = |CP_2|$$

$$\vec{P_1P_2} = \frac{1}{2}\vec{AB} \quad \text{---} P_1P_2 \parallel AB$$

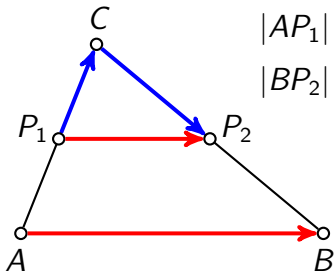
$$\vec{P_1P_2} = \vec{P_1C} + \vec{CP_2} = \frac{1}{2}\vec{AC} + \frac{1}{2}\vec{CB} = \frac{1}{2}(\vec{AC} + \vec{CB}) = \frac{1}{2}\vec{AB}$$

Zadatak 3

Dokažite da je srednjica trokuta paralelna s nasuprotnom stranicom trokuta i da je njezina duljina jednaka polovici duljine te stranice.

Rješenje

Srednjica trokuta je dužina koja spaja polovišta dviju stranica trokuta.



$$|AP_1| = |CP_1|$$

$$|BP_2| = |CP_2|$$

$$\overrightarrow{P_1P_2} = \frac{1}{2}\overrightarrow{AB}$$

$$P_1P_2 \parallel AB$$

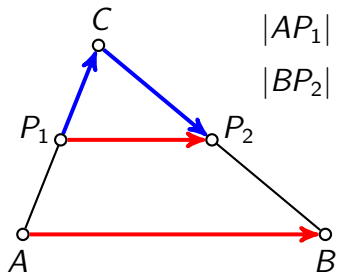
$$\overrightarrow{P_1P_2} = \overrightarrow{P_1C} + \overrightarrow{CP_2} = \frac{1}{2}\overrightarrow{AC} + \frac{1}{2}\overrightarrow{CB} = \frac{1}{2}(\overrightarrow{AC} + \overrightarrow{CB}) = \frac{1}{2}\overrightarrow{AB}$$

Zadatak 3

Dokažite da je srednjica trokuta paralelna s nasuprotnom stranicom trokuta i da je njezina duljina jednaka polovici duljine te stranice.

Rješenje

Srednjica trokuta je dužina koja spaja polovišta dviju stranica trokuta.



$$|AP_1| = |CP_1|$$

$$|BP_2| = |CP_2|$$

$$\overrightarrow{P_1P_2} = \frac{1}{2}\overrightarrow{AB}$$

$$|\lambda\vec{a}| = |\lambda| |\vec{a}|$$

$$P_1P_2 \parallel AB$$

$$|\overrightarrow{P_1P_2}| =$$

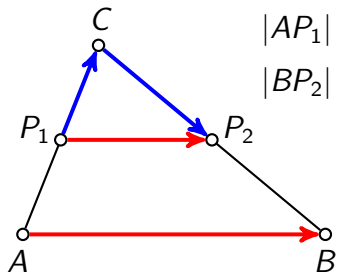
$$\overrightarrow{P_1P_2} = \overrightarrow{P_1C} + \overrightarrow{CP_2} = \frac{1}{2}\overrightarrow{AC} + \frac{1}{2}\overrightarrow{CB} = \frac{1}{2}(\overrightarrow{AC} + \overrightarrow{CB}) = \frac{1}{2}\overrightarrow{AB}$$

Zadatak 3

Dokažite da je srednjica trokuta paralelna s nasuprotnom stranicom trokuta i da je njezina duljina jednaka polovici duljine te stranice.

Rješenje

Srednjica trokuta je dužina koja spaja polovišta dviju stranica trokuta.



$$|AP_1| = |CP_1|$$

$$|BP_2| = |CP_2|$$

$$\overrightarrow{P_1P_2} = \frac{1}{2}\overrightarrow{AB}$$

$$|\lambda\vec{a}| = |\lambda| |\vec{a}|$$

$$P_1P_2 \parallel AB$$

$$|\overrightarrow{P_1P_2}| = \frac{1}{2}|\overrightarrow{AB}|$$

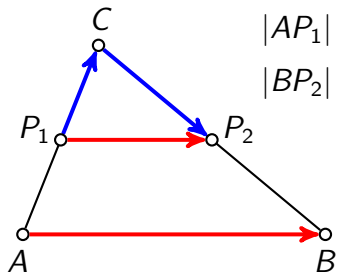
$$\overrightarrow{P_1P_2} = \overrightarrow{P_1C} + \overrightarrow{CP_2} = \frac{1}{2}\overrightarrow{AC} + \frac{1}{2}\overrightarrow{CB} = \frac{1}{2}(\overrightarrow{AC} + \overrightarrow{CB}) = \frac{1}{2}\overrightarrow{AB}$$

Zadatak 3

Dokažite da je srednjica trokuta paralelna s nasuprotnom stranicom trokuta i da je njezina duljina jednaka polovici duljine te stranice.

Rješenje

Srednjica trokuta je dužina koja spaja polovišta dviju stranica trokuta.



$$|AP_1| = |CP_1|$$

$$|BP_2| = |CP_2|$$

$$\overrightarrow{P_1P_2} = \frac{1}{2}\overrightarrow{AB}$$

$$|\lambda \vec{a}| = |\lambda| |\vec{a}|$$

$$P_1P_2 \parallel AB$$

$$|\overrightarrow{P_1P_2}| = \frac{1}{2}|\overrightarrow{AB}|$$

$$|P_1P_2| = \frac{1}{2}|AB|$$

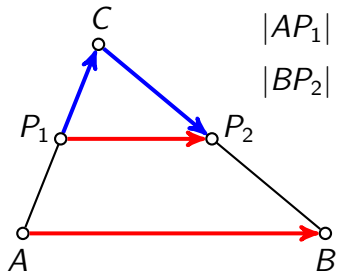
$$\overrightarrow{P_1P_2} = \overrightarrow{P_1C} + \overrightarrow{CP_2} = \frac{1}{2}\overrightarrow{AC} + \frac{1}{2}\overrightarrow{CB} = \frac{1}{2}(\overrightarrow{AC} + \overrightarrow{CB}) = \frac{1}{2}\overrightarrow{AB}$$

Zadatak 3

Dokažite da je srednjica trokuta paralelna s nasuprotnom stranicom trokuta i da je njezina duljina jednaka polovici duljine te stranice.

Rješenje

Srednjica trokuta je dužina koja spaja polovišta dviju stranica trokuta.



$$|AP_1| = |CP_1|$$

$$|BP_2| = |CP_2|$$

$$\overrightarrow{P_1P_2} = \frac{1}{2}\overrightarrow{AB}$$

$$|\lambda \vec{a}| = |\lambda| |\vec{a}|$$

$$P_1P_2 \parallel AB$$

$$|\overrightarrow{P_1P_2}| = \frac{1}{2}|\overrightarrow{AB}|$$

$$|P_1P_2| = \frac{1}{2}|AB|$$

$$\overrightarrow{P_1P_2} = \overrightarrow{P_1C} + \overrightarrow{CP_2} = \frac{1}{2}\overrightarrow{AC} + \frac{1}{2}\overrightarrow{CB} = \frac{1}{2}(\overrightarrow{AC} + \overrightarrow{CB}) = \frac{1}{2}\overrightarrow{AB}$$

čtvrti zadatak

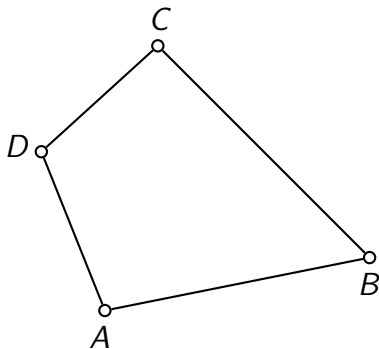
Zadatak 4

Dokažite da su polovišta stranica bilo kojeg četverokuta vrhovi paralelograma.

Zadatak 4

Dokažite da su polovišta stranica bilo kojeg četverokuta vrhovi paralelograma.

Rješenje

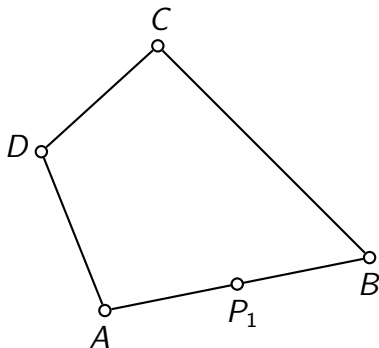


Zadatak 4

Dokažite da su polovišta stranica bilo kojeg četverokuta vrhovi paralelograma.

Rješenje

$$|AP_1| = |BP_1|$$



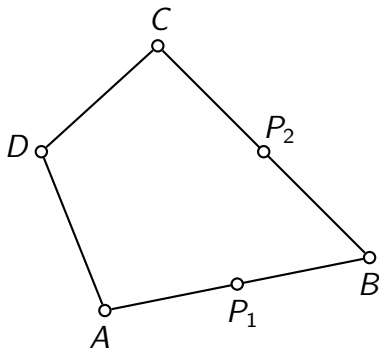
Zadatak 4

Dokažite da su polovišta stranica bilo kojeg četverokuta vrhovi paralelograma.

Rješenje

$$|AP_1| = |BP_1|$$

$$|BP_2| = |CP_2|$$



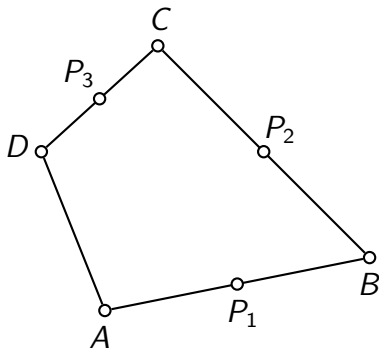
Zadatak 4

Dokažite da su polovišta stranica bilo kojeg četverokuta vrhovi paralelograma.

Rješenje

$$|AP_1| = |BP_1| \quad |CP_3| = |DP_3|$$

$$|BP_2| = |CP_2|$$



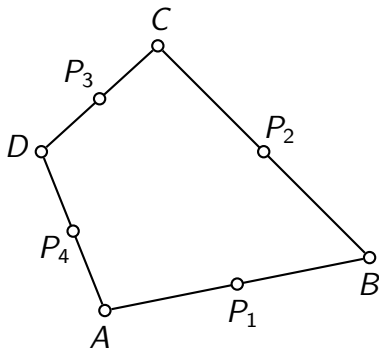
Zadatak 4

Dokažite da su polovišta stranica bilo kojeg četverokuta vrhovi paralelograma.

Rješenje

$$|AP_1| = |BP_1| \quad |CP_3| = |DP_3|$$

$$|BP_2| = |CP_2| \quad |AP_4| = |DP_4|$$



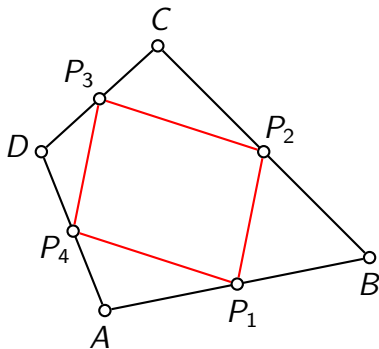
Zadatak 4

Dokažite da su polovišta stranica bilo kojeg četverokuta vrhovi paralelograma.

Rješenje

$$|AP_1| = |BP_1| \quad |CP_3| = |DP_3|$$

$$|BP_2| = |CP_2| \quad |AP_4| = |DP_4|$$



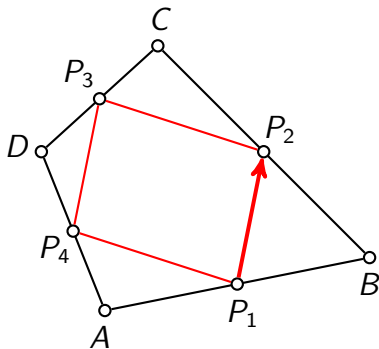
Zadatak 4

Dokažite da su polovišta stranica bilo kojeg četverokuta vrhovi paralelograma.

Rješenje

$$|AP_1| = |BP_1| \quad |CP_3| = |DP_3|$$

$$|BP_2| = |CP_2| \quad |AP_4| = |DP_4|$$



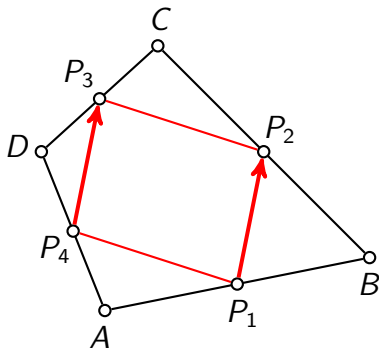
Zadatak 4

Dokažite da su polovišta stranica bilo kojeg četverokuta vrhovi paralelograma.

Rješenje

$$|AP_1| = |BP_1| \quad |CP_3| = |DP_3|$$

$$|BP_2| = |CP_2| \quad |AP_4| = |DP_4|$$

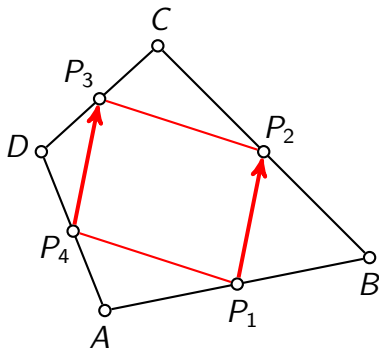


Zadatak 4

Dokažite da su polovišta stranica bilo kojeg četverokuta vrhovi paralelograma.

Rješenje

$$\begin{array}{ll} |AP_1| = |BP_1| & |CP_3| = |DP_3| \\ |BP_2| = |CP_2| & |AP_4| = |DP_4| \end{array} \quad \overrightarrow{P_1P_2} =$$

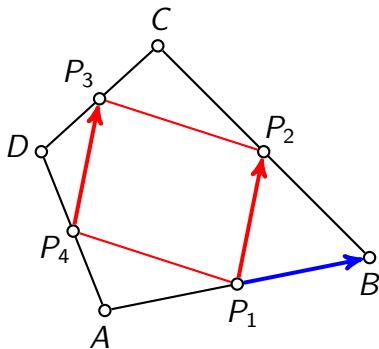


Zadatak 4

Dokažite da su polovišta stranica bilo kojeg četverokuta vrhovi paralelograma.

Rješenje

$$\begin{aligned} |AP_1| &= |BP_1| & |CP_3| &= |DP_3| & \overrightarrow{P_1P_2} &= \overrightarrow{P_1B} + \\ |BP_2| &= |CP_2| & |AP_4| &= |DP_4| \end{aligned}$$



Zadatak 4

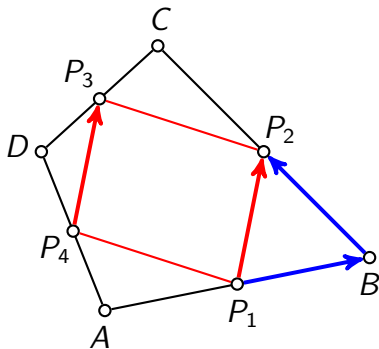
Dokažite da su polovišta stranica bilo kojeg četverokuta vrhovi paralelograma.

Rješenje

$$|AP_1| = |BP_1| \quad |CP_3| = |DP_3|$$

$$|BP_2| = |CP_2| \quad |AP_4| = |DP_4|$$

$$\overrightarrow{P_1P_2} = \overrightarrow{P_1B} + \overrightarrow{BP_2}$$



Zadatak 4

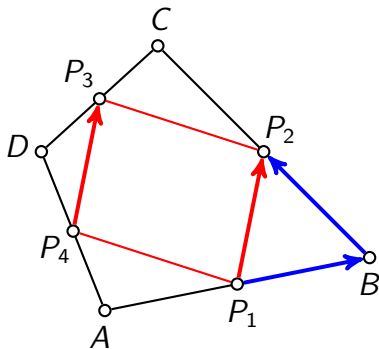
Dokažite da su polovišta stranica bilo kojeg četverokuta vrhovi paralelograma.

Rješenje

$$|AP_1| = |BP_1| \quad |CP_3| = |DP_3|$$

$$|BP_2| = |CP_2| \quad |AP_4| = |DP_4|$$

$$\begin{aligned}\overrightarrow{P_1P_2} &= \overrightarrow{P_1B} + \overrightarrow{BP_2} = \\ &= \frac{1}{2}\overrightarrow{AB}\end{aligned}$$



Zadatak 4

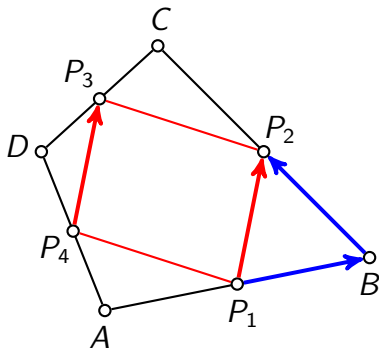
Dokažite da su polovišta stranica bilo kojeg četverokuta vrhovi paralelograma.

Rješenje

$$|AP_1| = |BP_1| \quad |CP_3| = |DP_3|$$

$$|BP_2| = |CP_2| \quad |AP_4| = |DP_4|$$

$$\begin{aligned}\overrightarrow{P_1P_2} &= \overrightarrow{P_1B} + \overrightarrow{BP_2} = \\ &= \frac{1}{2}\overrightarrow{AB} +\end{aligned}$$



Zadatak 4

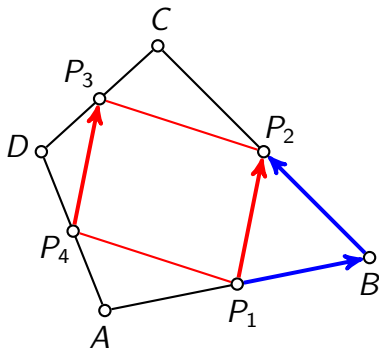
Dokažite da su polovišta stranica bilo kojeg četverokuta vrhovi paralelograma.

Rješenje

$$|AP_1| = |BP_1| \quad |CP_3| = |DP_3|$$

$$|BP_2| = |CP_2| \quad |AP_4| = |DP_4|$$

$$\begin{aligned}\overrightarrow{P_1P_2} &= \overrightarrow{P_1B} + \overrightarrow{BP_2} = \\ &= \frac{1}{2}\overrightarrow{AB} + \frac{1}{2}\overrightarrow{BC}\end{aligned}$$



Zadatak 4

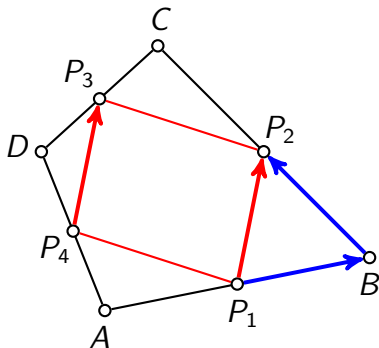
Dokažite da su polovišta stranica bilo kojeg četverokuta vrhovi paralelograma.

Rješenje

$$|AP_1| = |BP_1| \quad |CP_3| = |DP_3|$$

$$|BP_2| = |CP_2| \quad |AP_4| = |DP_4|$$

$$\begin{aligned}\overrightarrow{P_1P_2} &= \overrightarrow{P_1B} + \overrightarrow{BP_2} = \\ &= \frac{1}{2}\overrightarrow{AB} + \frac{1}{2}\overrightarrow{BC} = \\ &= \frac{1}{2}(\overrightarrow{AB} + \overrightarrow{BC})\end{aligned}$$



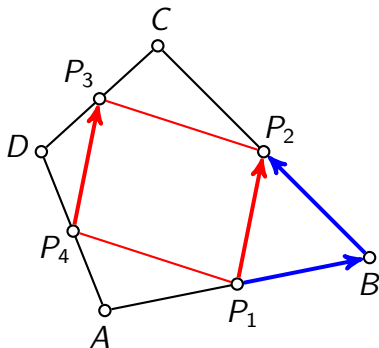
Zadatak 4

Dokažite da su polovišta stranica bilo kojeg četverokuta vrhovi paralelograma.

Rješenje

$$|AP_1| = |BP_1| \quad |CP_3| = |DP_3|$$

$$|BP_2| = |CP_2| \quad |AP_4| = |DP_4|$$



$$\begin{aligned}\overrightarrow{P_1P_2} &= \overrightarrow{P_1B} + \overrightarrow{BP_2} = \\ &= \frac{1}{2}\overrightarrow{AB} + \frac{1}{2}\overrightarrow{BC} = \\ &= \frac{1}{2}(\overrightarrow{AB} + \overrightarrow{BC}) = \frac{1}{2}\overrightarrow{AC}\end{aligned}$$

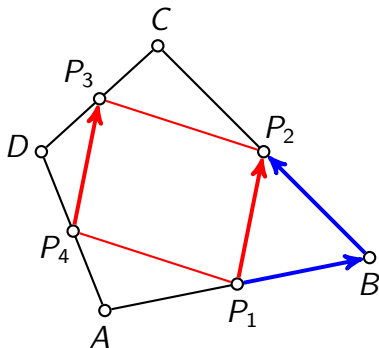
Zadatak 4

Dokažite da su polovišta stranica bilo kojeg četverokuta vrhovi paralelograma.

Rješenje

$$|AP_1| = |BP_1| \quad |CP_3| = |DP_3|$$

$$|BP_2| = |CP_2| \quad |AP_4| = |DP_4|$$



$$\begin{aligned}\overrightarrow{P_1P_2} &= \overrightarrow{P_1B} + \overrightarrow{BP_2} = \\ &= \frac{1}{2}\overrightarrow{AB} + \frac{1}{2}\overrightarrow{BC} = \\ &= \frac{1}{2}(\overrightarrow{AB} + \overrightarrow{BC}) = \frac{1}{2}\overrightarrow{AC}\end{aligned}$$

$$\overrightarrow{P_4P_3} =$$

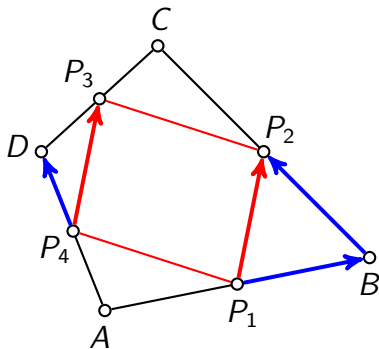
Zadatak 4

Dokažite da su polovišta stranica bilo kojeg četverokuta vrhovi paralelograma.

Rješenje

$$|AP_1| = |BP_1| \quad |CP_3| = |DP_3|$$

$$|BP_2| = |CP_2| \quad |AP_4| = |DP_4|$$



$$\begin{aligned}\overrightarrow{P_1P_2} &= \overrightarrow{P_1B} + \overrightarrow{BP_2} = \\ &= \frac{1}{2}\overrightarrow{AB} + \frac{1}{2}\overrightarrow{BC} = \\ &= \frac{1}{2}(\overrightarrow{AB} + \overrightarrow{BC}) = \frac{1}{2}\overrightarrow{AC}\end{aligned}$$

$$\overrightarrow{P_4P_3} = \overrightarrow{P_4D} +$$

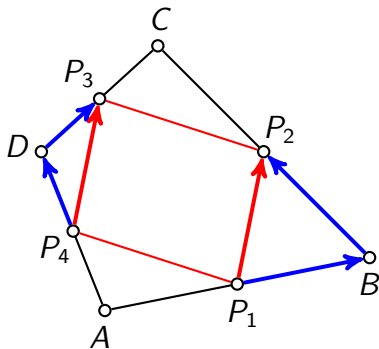
Zadatak 4

Dokažite da su polovišta stranica bilo kojeg četverokuta vrhovi paralelograma.

Rješenje

$$|AP_1| = |BP_1| \quad |CP_3| = |DP_3|$$

$$|BP_2| = |CP_2| \quad |AP_4| = |DP_4|$$



$$\begin{aligned}\overrightarrow{P_1P_2} &= \overrightarrow{P_1B} + \overrightarrow{BP_2} = \\ &= \frac{1}{2}\overrightarrow{AB} + \frac{1}{2}\overrightarrow{BC} = \\ &= \frac{1}{2}(\overrightarrow{AB} + \overrightarrow{BC}) = \frac{1}{2}\overrightarrow{AC}\end{aligned}$$

$$\overrightarrow{P_4P_3} = \overrightarrow{P_4D} + \overrightarrow{DP_3}$$

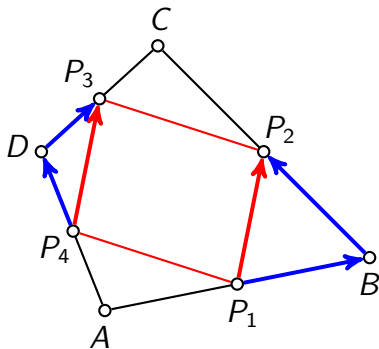
Zadatak 4

Dokažite da su polovišta stranica bilo kojeg četverokuta vrhovi paralelograma.

Rješenje

$$|AP_1| = |BP_1| \quad |CP_3| = |DP_3|$$

$$|BP_2| = |CP_2| \quad |AP_4| = |DP_4|$$



$$\begin{aligned}\overrightarrow{P_1P_2} &= \overrightarrow{P_1B} + \overrightarrow{BP_2} = \\ &= \frac{1}{2}\overrightarrow{AB} + \frac{1}{2}\overrightarrow{BC} = \\ &= \frac{1}{2}(\overrightarrow{AB} + \overrightarrow{BC}) = \frac{1}{2}\overrightarrow{AC}\end{aligned}$$

$$\begin{aligned}\overrightarrow{P_4P_3} &= \overrightarrow{P_4D} + \overrightarrow{DP_3} = \\ &= \frac{1}{2}\overrightarrow{AD}\end{aligned}$$

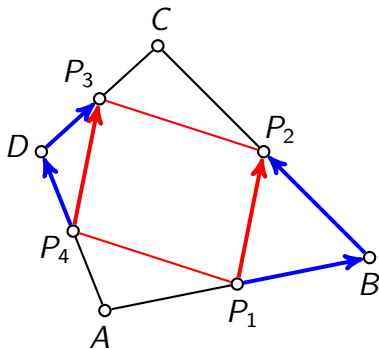
Zadatak 4

Dokažite da su polovišta stranica bilo kojeg četverokuta vrhovi paralelograma.

Rješenje

$$|AP_1| = |BP_1| \quad |CP_3| = |DP_3|$$

$$|BP_2| = |CP_2| \quad |AP_4| = |DP_4|$$



$$\begin{aligned}\overrightarrow{P_1P_2} &= \overrightarrow{P_1B} + \overrightarrow{BP_2} = \\ &= \frac{1}{2}\overrightarrow{AB} + \frac{1}{2}\overrightarrow{BC} = \\ &= \frac{1}{2}(\overrightarrow{AB} + \overrightarrow{BC}) = \frac{1}{2}\overrightarrow{AC}\end{aligned}$$

$$\begin{aligned}\overrightarrow{P_4P_3} &= \overrightarrow{P_4D} + \overrightarrow{DP_3} = \\ &= \frac{1}{2}\overrightarrow{AD} +\end{aligned}$$

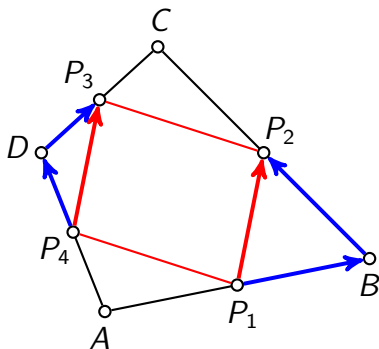
Zadatak 4

Dokažite da su polovišta stranica bilo kojeg četverokuta vrhovi paralelograma.

Rješenje

$$|AP_1| = |BP_1| \quad |CP_3| = |DP_3|$$

$$|BP_2| = |CP_2| \quad |AP_4| = |DP_4|$$



$$\begin{aligned}\overrightarrow{P_1P_2} &= \overrightarrow{P_1B} + \overrightarrow{BP_2} = \\ &= \frac{1}{2}\overrightarrow{AB} + \frac{1}{2}\overrightarrow{BC} = \\ &= \frac{1}{2}(\overrightarrow{AB} + \overrightarrow{BC}) = \frac{1}{2}\overrightarrow{AC}\end{aligned}$$

$$\begin{aligned}\overrightarrow{P_4P_3} &= \overrightarrow{P_4D} + \overrightarrow{DP_3} = \\ &= \frac{1}{2}\overrightarrow{AD} + \frac{1}{2}\overrightarrow{DC}\end{aligned}$$

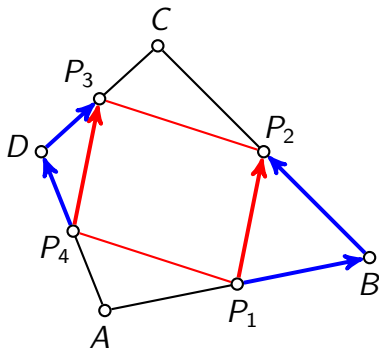
Zadatak 4

Dokažite da su polovišta stranica bilo kojeg četverokuta vrhovi paralelograma.

Rješenje

$$|AP_1| = |BP_1| \quad |CP_3| = |DP_3|$$

$$|BP_2| = |CP_2| \quad |AP_4| = |DP_4|$$



$$\begin{aligned}\overrightarrow{P_1P_2} &= \overrightarrow{P_1B} + \overrightarrow{BP_2} = \\ &= \frac{1}{2}\overrightarrow{AB} + \frac{1}{2}\overrightarrow{BC} = \\ &= \frac{1}{2}(\overrightarrow{AB} + \overrightarrow{BC}) = \frac{1}{2}\overrightarrow{AC}\end{aligned}$$

$$\begin{aligned}\overrightarrow{P_4P_3} &= \overrightarrow{P_4D} + \overrightarrow{DP_3} = \\ &= \frac{1}{2}\overrightarrow{AD} + \frac{1}{2}\overrightarrow{DC} = \\ &= \frac{1}{2}(\overrightarrow{AD} + \overrightarrow{DC})\end{aligned}$$

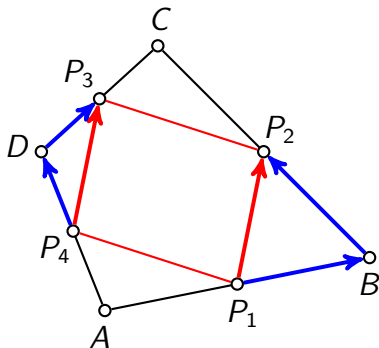
Zadatak 4

Dokažite da su polovišta stranica bilo kojeg četverokuta vrhovi paralelograma.

Rješenje

$$|AP_1| = |BP_1| \quad |CP_3| = |DP_3|$$

$$|BP_2| = |CP_2| \quad |AP_4| = |DP_4|$$



$$\begin{aligned}\overrightarrow{P_1P_2} &= \overrightarrow{P_1B} + \overrightarrow{BP_2} = \\ &= \frac{1}{2}\overrightarrow{AB} + \frac{1}{2}\overrightarrow{BC} = \\ &= \frac{1}{2}(\overrightarrow{AB} + \overrightarrow{BC}) = \frac{1}{2}\overrightarrow{AC}\end{aligned}$$

$$\begin{aligned}\overrightarrow{P_4P_3} &= \overrightarrow{P_4D} + \overrightarrow{DP_3} = \\ &= \frac{1}{2}\overrightarrow{AD} + \frac{1}{2}\overrightarrow{DC} = \\ &= \frac{1}{2}(\overrightarrow{AD} + \overrightarrow{DC}) = \frac{1}{2}\overrightarrow{AC}\end{aligned}$$

Zadatak 4

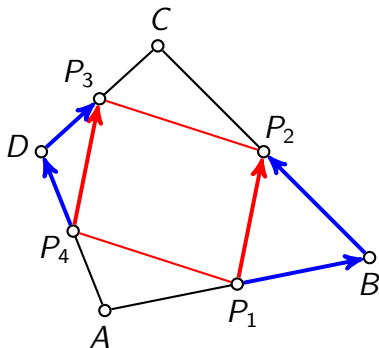
Dokažite da su polovišta stranica bilo kojeg četverokuta vrhovi paralelograma.

$$\implies \overrightarrow{P_1P_2} = \overrightarrow{P_4P_3}$$

Rješenje

$$|AP_1| = |BP_1| \quad |CP_3| = |DP_3|$$

$$|BP_2| = |CP_2| \quad |AP_4| = |DP_4|$$



$$\begin{aligned}\overrightarrow{P_1P_2} &= \overrightarrow{P_1B} + \overrightarrow{BP_2} = \\ &= \frac{1}{2}\overrightarrow{AB} + \frac{1}{2}\overrightarrow{BC} = \\ &= \frac{1}{2}(\overrightarrow{AB} + \overrightarrow{BC}) = \frac{1}{2}\overrightarrow{AC}\end{aligned}$$

$$\begin{aligned}\overrightarrow{P_4P_3} &= \overrightarrow{P_4D} + \overrightarrow{DP_3} = \\ &= \frac{1}{2}\overrightarrow{AD} + \frac{1}{2}\overrightarrow{DC} = \\ &= \frac{1}{2}(\overrightarrow{AD} + \overrightarrow{DC}) = \frac{1}{2}\overrightarrow{AC}\end{aligned}$$

Zadatak 4

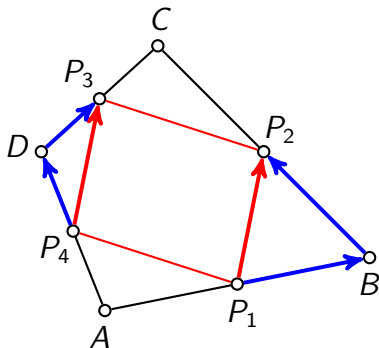
Dokažite da su polovišta stranica bilo kojeg četverokuta vrhovi paralelograma.

$$\implies \overrightarrow{P_1P_2} = \overrightarrow{P_4P_3} \implies P_1P_2P_3P_4 \text{ je paralelogram}$$

Rješenje

$$|AP_1| = |BP_1| \quad |CP_3| = |DP_3|$$

$$|BP_2| = |CP_2| \quad |AP_4| = |DP_4|$$

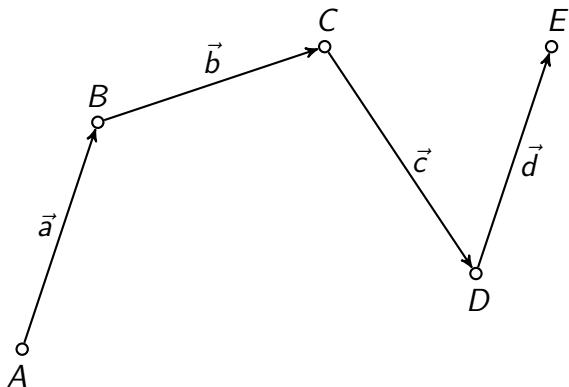


$$\begin{aligned}\overrightarrow{P_1P_2} &= \overrightarrow{P_1B} + \overrightarrow{BP_2} = \\ &= \frac{1}{2}\overrightarrow{AB} + \frac{1}{2}\overrightarrow{BC} = \\ &= \frac{1}{2}(\overrightarrow{AB} + \overrightarrow{BC}) = \frac{1}{2}\overrightarrow{AC}\end{aligned}$$

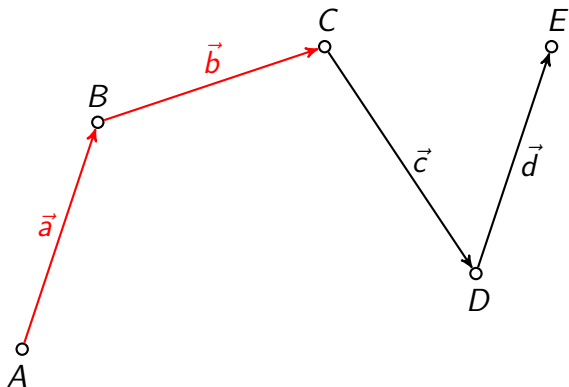
$$\begin{aligned}\overrightarrow{P_4P_3} &= \overrightarrow{P_4D} + \overrightarrow{DP_3} = \\ &= \frac{1}{2}\overrightarrow{AD} + \frac{1}{2}\overrightarrow{DC} = \\ &= \frac{1}{2}(\overrightarrow{AD} + \overrightarrow{DC}) = \frac{1}{2}\overrightarrow{AC}\end{aligned}$$

peti zadatak

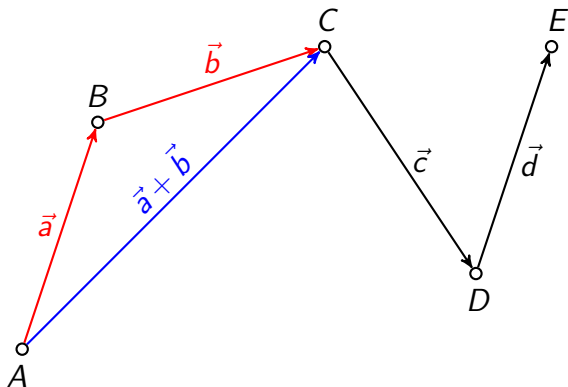
Zbrajanje više vektora



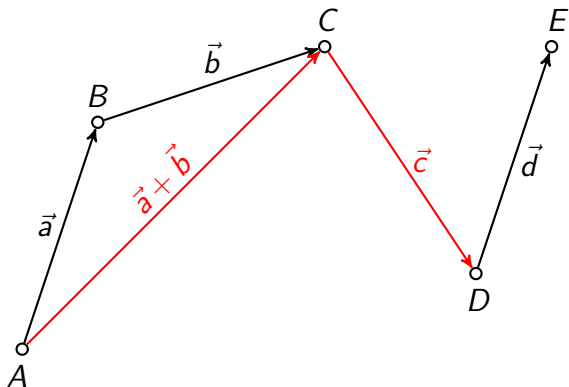
Zbrajanje više vektora



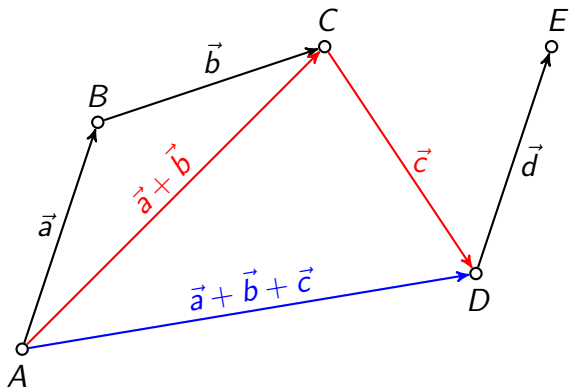
Zbrajanje više vektora



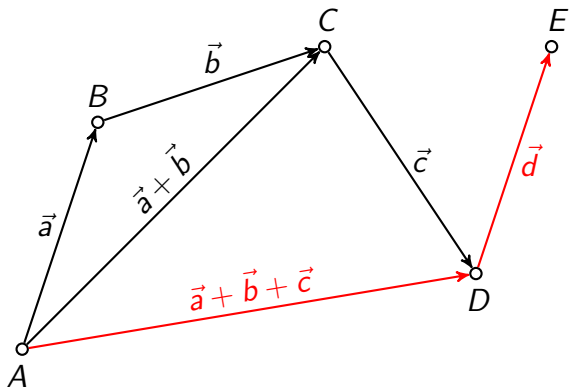
Zbrajanje više vektora



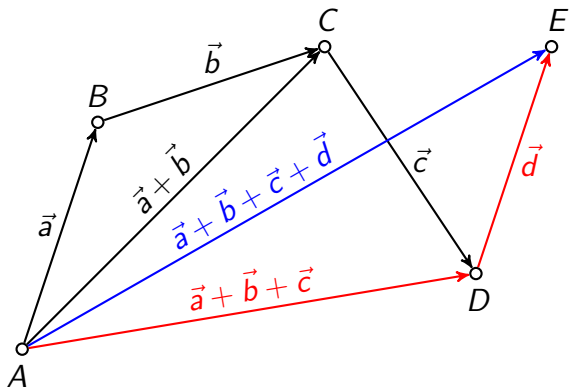
Zbrajanje više vektora



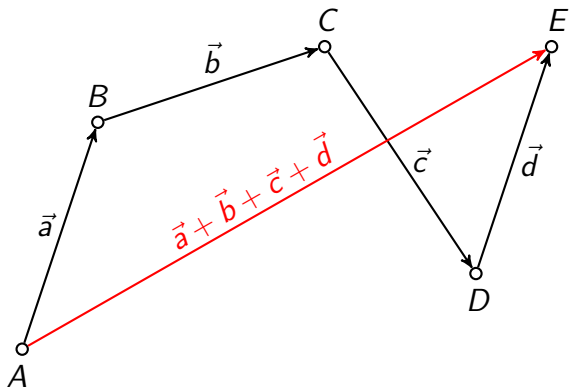
Zbrajanje više vektora



Zbrajanje više vektora



Zbrajanje više vektora



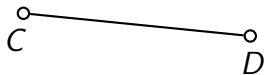
Zadatak 5

Neka su \overline{AB} i \overline{CD} bilo koje dužine, a točke S i T redom polovišta tih dužina. Dokažite da je $\overrightarrow{AC} + \overrightarrow{BD} = 2\overrightarrow{ST}$.

Zadatak 5

Neka su \overline{AB} i \overline{CD} bilo koje dužine, a točke S i T redom polovišta tih dužina. Dokažite da je $\overrightarrow{AC} + \overrightarrow{BD} = 2\overrightarrow{ST}$.

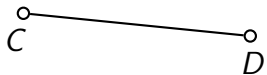
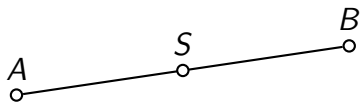
Rješenje



Zadatak 5

Neka su \overline{AB} i \overline{CD} bilo koje dužine, a točke S i T redom polovišta tih dužina. Dokažite da je $\overrightarrow{AC} + \overrightarrow{BD} = 2\overrightarrow{ST}$.

Rješenje

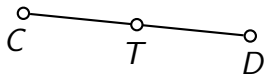
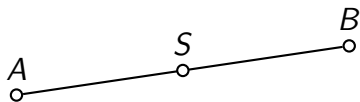


$$|AS| = |BS|$$

Zadatak 5

Neka su \overline{AB} i \overline{CD} bilo koje dužine, a točke S i T redom polovišta tih dužina. Dokažite da je $\overrightarrow{AC} + \overrightarrow{BD} = 2\overrightarrow{ST}$.

Rješenje



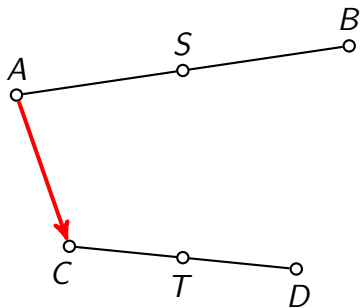
$$|AS| = |BS|$$

$$|CT| = |DT|$$

Zadatak 5

Neka su \overline{AB} i \overline{CD} bilo koje dužine, a točke S i T redom polovišta tih dužina. Dokažite da je $\overrightarrow{AC} + \overrightarrow{BD} = 2\overrightarrow{ST}$.

Rješenje



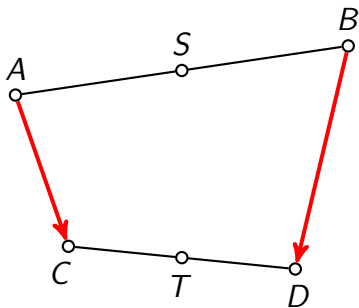
$$|AS| = |BS|$$

$$|CT| = |DT|$$

Zadatak 5

Neka su \overline{AB} i \overline{CD} bilo koje dužine, a točke S i T redom polovišta tih dužina. Dokažite da je $\overrightarrow{AC} + \overrightarrow{BD} = 2\overrightarrow{ST}$.

Rješenje



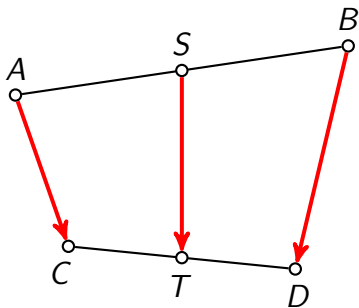
$$|AS| = |BS|$$

$$|CT| = |DT|$$

Zadatak 5

Neka su \overline{AB} i \overline{CD} bilo koje dužine, a točke S i T redom polovišta tih dužina. Dokažite da je $\overrightarrow{AC} + \overrightarrow{BD} = 2\overrightarrow{ST}$.

Rješenje



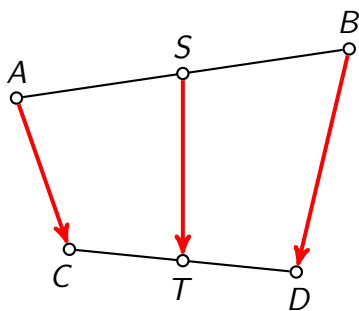
$$|AS| = |BS|$$

$$|CT| = |DT|$$

Zadatak 5

Neka su \overline{AB} i \overline{CD} bilo koje dužine, a točke S i T redom polovišta tih dužina. Dokažite da je $\overrightarrow{AC} + \overrightarrow{BD} = 2\overrightarrow{ST}$.

Rješenje



$$\overrightarrow{ST} =$$

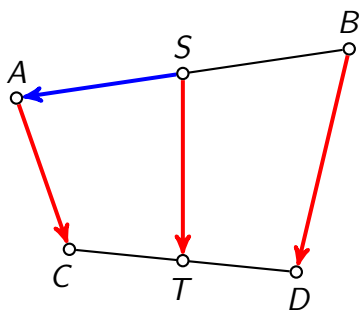
$$|AS| = |BS|$$

$$|CT| = |DT|$$

Zadatak 5

Neka su \overline{AB} i \overline{CD} bilo koje dužine, a točke S i T redom polovišta tih dužina. Dokažite da je $\overrightarrow{AC} + \overrightarrow{BD} = 2\overrightarrow{ST}$.

Rješenje



$$\overrightarrow{ST} = \overrightarrow{SA}$$

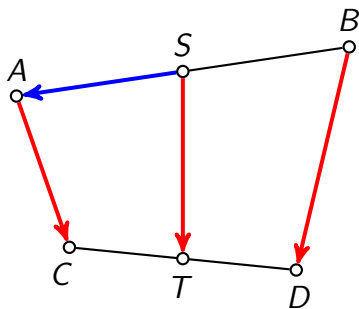
$$|AS| = |BS|$$

$$|CT| = |DT|$$

Zadatak 5

Neka su \overline{AB} i \overline{CD} bilo koje dužine, a točke S i T redom polovišta tih dužina. Dokažite da je $\overrightarrow{AC} + \overrightarrow{BD} = 2\overrightarrow{ST}$.

Rješenje



$$\overrightarrow{ST} = \overrightarrow{SA} + \overrightarrow{AC}$$

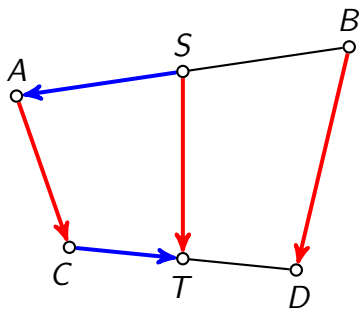
$$|AS| = |BS|$$

$$|CT| = |DT|$$

Zadatak 5

Neka su \overline{AB} i \overline{CD} bilo koje dužine, a točke S i T redom polovišta tih dužina. Dokažite da je $\overrightarrow{AC} + \overrightarrow{BD} = 2\overrightarrow{ST}$.

Rješenje



$$\overrightarrow{ST} = \overrightarrow{SA} + \overrightarrow{AC} + \overrightarrow{CT}$$

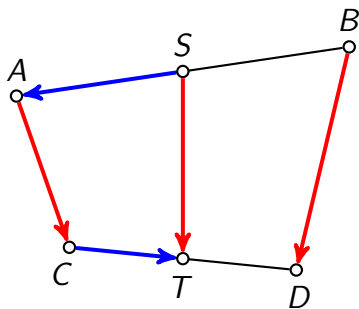
$$|AS| = |BS|$$

$$|CT| = |DT|$$

Zadatak 5

Neka su \overline{AB} i \overline{CD} bilo koje dužine, a točke S i T redom polovišta tih dužina. Dokažite da je $\overrightarrow{AC} + \overrightarrow{BD} = 2\overrightarrow{ST}$.

Rješenje



$$\overrightarrow{ST} = \overrightarrow{SA} + \overrightarrow{AC} + \overrightarrow{CT}$$

$$\overrightarrow{ST} =$$

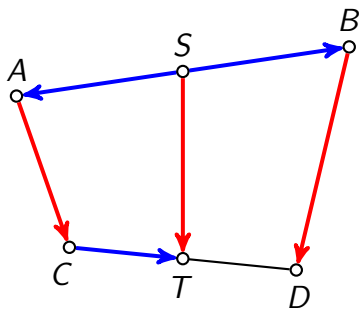
$$|AS| = |BS|$$

$$|CT| = |DT|$$

Zadatak 5

Neka su \overline{AB} i \overline{CD} bilo koje dužine, a točke S i T redom polovišta tih dužina. Dokažite da je $\overrightarrow{AC} + \overrightarrow{BD} = 2\overrightarrow{ST}$.

Rješenje



$$\overrightarrow{ST} = \overrightarrow{SA} + \overrightarrow{AC} + \overrightarrow{CT}$$

$$\overrightarrow{ST} = \overrightarrow{SB}$$

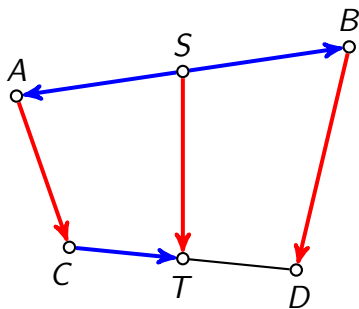
$$|AS| = |BS|$$

$$|CT| = |DT|$$

Zadatak 5

Neka su \overline{AB} i \overline{CD} bilo koje dužine, a točke S i T redom polovišta tih dužina. Dokažite da je $\overrightarrow{AC} + \overrightarrow{BD} = 2\overrightarrow{ST}$.

Rješenje



$$\overrightarrow{ST} = \overrightarrow{SA} + \overrightarrow{AC} + \overrightarrow{CT}$$

$$\overrightarrow{ST} = \overrightarrow{SB} + \overrightarrow{BD}$$

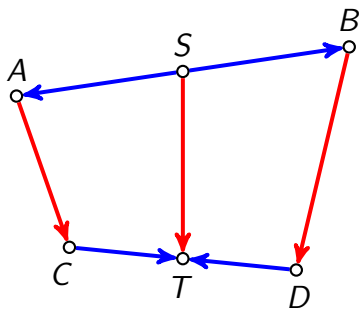
$$|AS| = |BS|$$

$$|CT| = |DT|$$

Zadatak 5

Neka su \overline{AB} i \overline{CD} bilo koje dužine, a točke S i T redom polovišta tih dužina. Dokažite da je $\overrightarrow{AC} + \overrightarrow{BD} = 2\overrightarrow{ST}$.

Rješenje



$$\overrightarrow{ST} = \overrightarrow{SA} + \overrightarrow{AC} + \overrightarrow{CT}$$

$$\overrightarrow{ST} = \overrightarrow{SB} + \overrightarrow{BD} + \overrightarrow{DT}$$

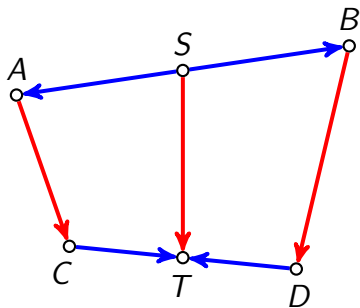
$$|AS| = |BS|$$

$$|CT| = |DT|$$

Zadatak 5

Neka su \overline{AB} i \overline{CD} bilo koje dužine, a točke S i T redom polovišta tih dužina. Dokažite da je $\overrightarrow{AC} + \overrightarrow{BD} = 2\overrightarrow{ST}$.

Rješenje



$$\begin{aligned}\overrightarrow{ST} &= \overrightarrow{SA} + \overrightarrow{AC} + \overrightarrow{CT} \\ \overrightarrow{ST} &= \overrightarrow{SB} + \overrightarrow{BD} + \overrightarrow{DT}\end{aligned} \quad / +$$

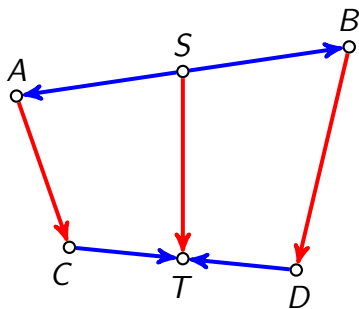
$$|AS| = |BS|$$

$$|CT| = |DT|$$

Zadatak 5

Neka su \overline{AB} i \overline{CD} bilo koje dužine, a točke S i T redom polovišta tih dužina. Dokažite da je $\overrightarrow{AC} + \overrightarrow{BD} = 2\overrightarrow{ST}$.

Rješenje



$$\begin{aligned} \overrightarrow{ST} &= \overrightarrow{SA} + \overrightarrow{AC} + \overrightarrow{CT} \\ \overrightarrow{ST} &= \overrightarrow{SB} + \overrightarrow{BD} + \overrightarrow{DT} \end{aligned} \quad / +$$

$$2\overrightarrow{ST} =$$

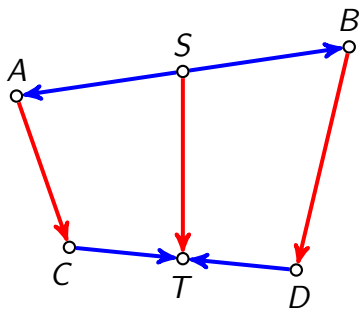
$$|AS| = |BS|$$

$$|CT| = |DT|$$

Zadatak 5

Neka su \overline{AB} i \overline{CD} bilo koje dužine, a točke S i T redom polovišta tih dužina. Dokažite da je $\overrightarrow{AC} + \overrightarrow{BD} = 2\overrightarrow{ST}$.

Rješenje



$$\begin{aligned}\overrightarrow{ST} &= \overrightarrow{SA} + \overrightarrow{AC} + \overrightarrow{CT} \\ \overrightarrow{ST} &= \overrightarrow{SB} + \overrightarrow{BD} + \overrightarrow{DT}\end{aligned} \quad / +$$

$$2\overrightarrow{ST} = \overrightarrow{AC} + \overrightarrow{BD}$$

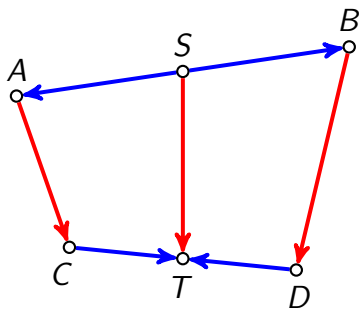
$$|AS| = |BS|$$

$$|CT| = |DT|$$

Zadatak 5

Neka su \overline{AB} i \overline{CD} bilo koje dužine, a točke S i T redom polovišta tih dužina. Dokažite da je $\overrightarrow{AC} + \overrightarrow{BD} = 2\overrightarrow{ST}$.

Rješenje



$$\begin{aligned} \overrightarrow{ST} &= \overrightarrow{SA} + \overrightarrow{AC} + \overrightarrow{CT} \\ \overrightarrow{ST} &= \overrightarrow{SB} + \overrightarrow{BD} + \overrightarrow{DT} \end{aligned} \quad / +$$

$$2\overrightarrow{ST} = \overrightarrow{AC} + \overrightarrow{BD} + \overrightarrow{SA} + \overrightarrow{SB}$$

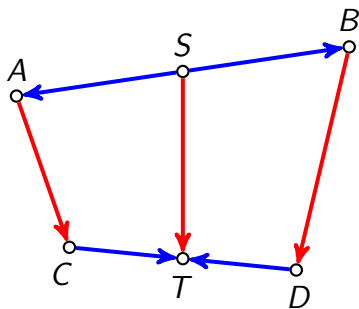
$$|AS| = |BS|$$

$$|CT| = |DT|$$

Zadatak 5

Neka su \overline{AB} i \overline{CD} bilo koje dužine, a točke S i T redom polovišta tih dužina. Dokažite da je $\overrightarrow{AC} + \overrightarrow{BD} = 2\overrightarrow{ST}$.

Rješenje



$$\begin{aligned} \overrightarrow{ST} &= \overrightarrow{SA} + \overrightarrow{AC} + \overrightarrow{CT} \\ \overrightarrow{ST} &= \overrightarrow{SB} + \overrightarrow{BD} + \overrightarrow{DT} \end{aligned} \quad / +$$

$$2\overrightarrow{ST} = \overrightarrow{AC} + \overrightarrow{BD} + \overrightarrow{SA} + \overrightarrow{SB} + \overrightarrow{CT} + \overrightarrow{DT}$$

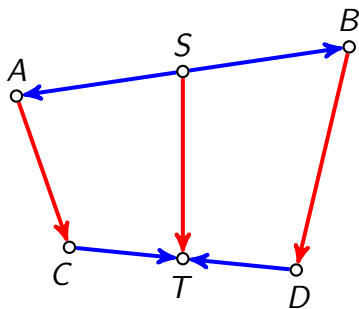
$$|AS| = |BS|$$

$$|CT| = |DT|$$

Zadatak 5

Neka su \overline{AB} i \overline{CD} bilo koje dužine, a točke S i T redom polovišta tih dužina. Dokažite da je $\overrightarrow{AC} + \overrightarrow{BD} = 2\overrightarrow{ST}$.

Rješenje



$$\begin{aligned} \overrightarrow{ST} &= \overrightarrow{SA} + \overrightarrow{AC} + \overrightarrow{CT} \\ \overrightarrow{ST} &= \overrightarrow{SB} + \overrightarrow{BD} + \overrightarrow{DT} \end{aligned} \quad / +$$

$$2\overrightarrow{ST} = \overrightarrow{AC} + \overrightarrow{BD} + \underbrace{\overrightarrow{SA} + \overrightarrow{SB}} + \overrightarrow{CT} + \overrightarrow{DT}$$

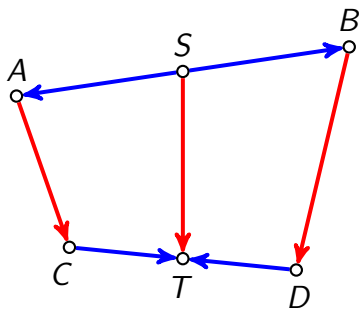
$$|AS| = |BS|$$

$$|CT| = |DT|$$

Zadatak 5

Neka su \overline{AB} i \overline{CD} bilo koje dužine, a točke S i T redom polovišta tih dužina. Dokažite da je $\overrightarrow{AC} + \overrightarrow{BD} = 2\overrightarrow{ST}$.

Rješenje



$$\begin{aligned} \overrightarrow{ST} &= \overrightarrow{SA} + \overrightarrow{AC} + \overrightarrow{CT} \\ \overrightarrow{ST} &= \overrightarrow{SB} + \overrightarrow{BD} + \overrightarrow{DT} \end{aligned} \quad / +$$

$$2\overrightarrow{ST} = \overrightarrow{AC} + \overrightarrow{BD} + \underbrace{\overrightarrow{SA} + \overrightarrow{SB}} + \overrightarrow{CT} + \overrightarrow{DT}$$

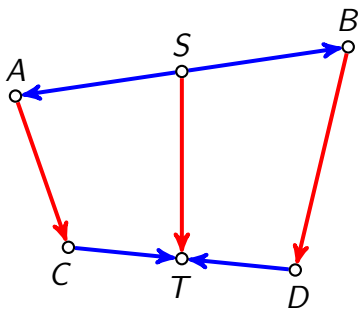
$$|AS| = |BS| \rightsquigarrow \overrightarrow{SB} = -\overrightarrow{SA}$$

$$|CT| = |DT|$$

Zadatak 5

Neka su \overline{AB} i \overline{CD} bilo koje dužine, a točke S i T redom polovišta tih dužina. Dokažite da je $\overrightarrow{AC} + \overrightarrow{BD} = 2\overrightarrow{ST}$.

Rješenje



$$\begin{aligned} \overrightarrow{ST} &= \overrightarrow{SA} + \overrightarrow{AC} + \overrightarrow{CT} \\ \overrightarrow{ST} &= \overrightarrow{SB} + \overrightarrow{BD} + \overrightarrow{DT} \end{aligned} \quad / +$$

$$\begin{aligned} 2\overrightarrow{ST} &= \overrightarrow{AC} + \overrightarrow{BD} + \underbrace{\overrightarrow{SA} + \overrightarrow{SB}}_{=\vec{0}} + \overrightarrow{CT} + \overrightarrow{DT} \end{aligned}$$

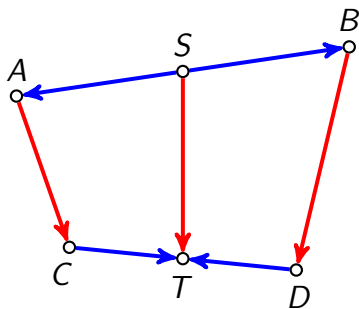
$$|AS| = |BS| \rightsquigarrow \overrightarrow{SB} = -\overrightarrow{SA}$$

$$|CT| = |DT|$$

Zadatak 5

Neka su \overline{AB} i \overline{CD} bilo koje dužine, a točke S i T redom polovišta tih dužina. Dokažite da je $\overrightarrow{AC} + \overrightarrow{BD} = 2\overrightarrow{ST}$.

Rješenje



$$\begin{aligned} \overrightarrow{ST} &= \overrightarrow{SA} + \overrightarrow{AC} + \overrightarrow{CT} \\ \overrightarrow{ST} &= \overrightarrow{SB} + \overrightarrow{BD} + \overrightarrow{DT} \end{aligned} \quad / +$$

$$\begin{aligned} 2\overrightarrow{ST} &= \overrightarrow{AC} + \overrightarrow{BD} + \underbrace{\overrightarrow{SA} + \overrightarrow{SB}}_{=\vec{0}} + \underbrace{\overrightarrow{CT} + \overrightarrow{DT}} \end{aligned}$$

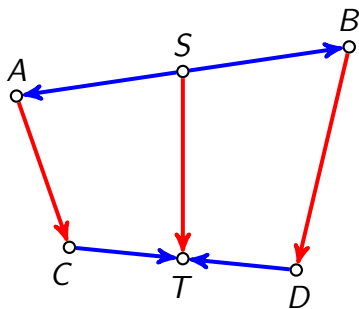
$$|AS| = |BS| \rightsquigarrow \overrightarrow{SB} = -\overrightarrow{SA}$$

$$|CT| = |DT|$$

Zadatak 5

Neka su \overline{AB} i \overline{CD} bilo koje dužine, a točke S i T redom polovišta tih dužina. Dokažite da je $\overrightarrow{AC} + \overrightarrow{BD} = 2\overrightarrow{ST}$.

Rješenje



$$\begin{aligned}\overrightarrow{ST} &= \overrightarrow{SA} + \overrightarrow{AC} + \overrightarrow{CT} \\ \overrightarrow{ST} &= \overrightarrow{SB} + \overrightarrow{BD} + \overrightarrow{DT}\end{aligned} \quad / +$$

$$\overline{\overrightarrow{2ST} = \overrightarrow{AC} + \overrightarrow{BD} + \underbrace{\overrightarrow{SA} + \overrightarrow{SB}}_{= \vec{0}} + \underbrace{\overrightarrow{CT} + \overrightarrow{DT}}_{= \vec{0}}}$$

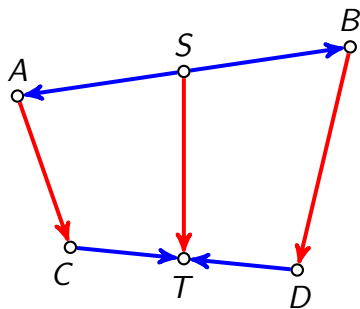
$$|AS| = |BS| \rightsquigarrow \overrightarrow{SB} = -\overrightarrow{SA}$$

$$|CT| = |DT| \rightsquigarrow \overrightarrow{DT} = -\overrightarrow{CT}$$

Zadatak 5

Neka su \overline{AB} i \overline{CD} bilo koje dužine, a točke S i T redom polovišta tih dužina. Dokažite da je $\overrightarrow{AC} + \overrightarrow{BD} = 2\overrightarrow{ST}$.

Rješenje



$$\begin{aligned}\overrightarrow{ST} &= \overrightarrow{SA} + \overrightarrow{AC} + \overrightarrow{CT} \\ \overrightarrow{ST} &= \overrightarrow{SB} + \overrightarrow{BD} + \overrightarrow{DT}\end{aligned} \quad / +$$

$$2\overrightarrow{ST} = \overrightarrow{AC} + \overrightarrow{BD} + \underbrace{\overrightarrow{SA} + \overrightarrow{SB}}_{=\vec{0}} + \underbrace{\overrightarrow{CT} + \overrightarrow{DT}}_{=\vec{0}}$$

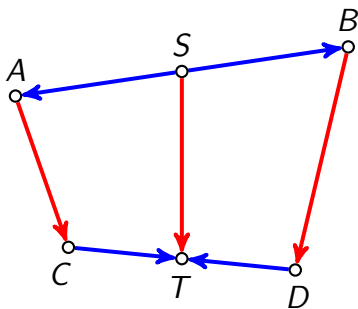
$$|AS| = |BS| \rightsquigarrow \overrightarrow{SB} = -\overrightarrow{SA}$$

$$|CT| = |DT| \rightsquigarrow \overrightarrow{DT} = -\overrightarrow{CT}$$

Zadatak 5

Neka su \overline{AB} i \overline{CD} bilo koje dužine, a točke S i T redom polovišta tih dužina. Dokažite da je $\overrightarrow{AC} + \overrightarrow{BD} = 2\overrightarrow{ST}$.

Rješenje



$$\begin{aligned}\overrightarrow{ST} &= \overrightarrow{SA} + \overrightarrow{AC} + \overrightarrow{CT} \\ \overrightarrow{ST} &= \overrightarrow{SB} + \overrightarrow{BD} + \overrightarrow{DT}\end{aligned} \quad / +$$

$$2\overrightarrow{ST} = \overrightarrow{AC} + \overrightarrow{BD} + \underbrace{\overrightarrow{SA} + \overrightarrow{SB}}_{=\vec{0}} + \underbrace{\overrightarrow{CT} + \overrightarrow{DT}}_{=\vec{0}}$$


$$2\overrightarrow{ST} = \overrightarrow{AC} + \overrightarrow{BD}$$

$$|AS| = |BS| \rightsquigarrow \overrightarrow{SB} = -\overrightarrow{SA}$$


$$|CT| = |DT| \rightsquigarrow \overrightarrow{DT} = -\overrightarrow{CT}$$

Dijeljenje dužine u zadanom omjeru

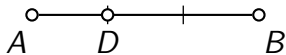
Dijeljenje dužine u zadanom omjeru



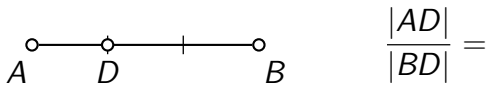
Dijeljenje dužine u zadanom omjeru



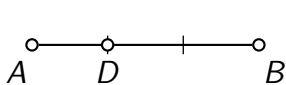
Dijeljenje dužine u zadanom omjeru



Dijeljenje dužine u zadanom omjeru

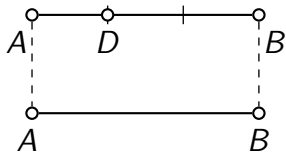


Dijeljenje dužine u zadanom omjeru



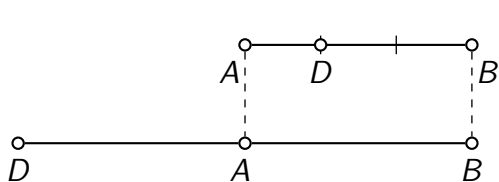
$$\frac{|AD|}{|BD|} = \frac{1}{2}$$

Dijeljenje dužine u zadanom omjeru



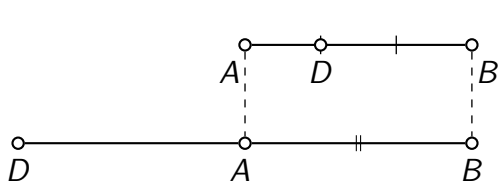
$$\frac{|AD|}{|BD|} = \frac{1}{2}$$

Dijeljenje dužine u zadanom omjeru



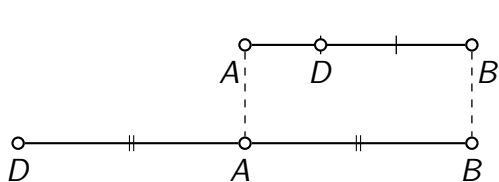
$$\frac{|AD|}{|BD|} = \frac{1}{2}$$

Dijeljenje dužine u zadanom omjeru



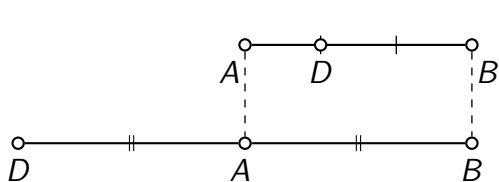
$$\frac{|AD|}{|BD|} = \frac{1}{2}$$

Dijeljenje dužine u zadanom omjeru



$$\frac{|AD|}{|BD|} = \frac{1}{2}$$

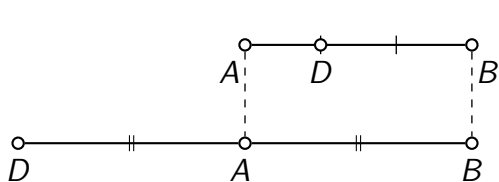
Dijeljenje dužine u zadanom omjeru



$$\frac{|AD|}{|BD|} = \frac{1}{2}$$

$$\frac{|AD|}{|BD|} =$$

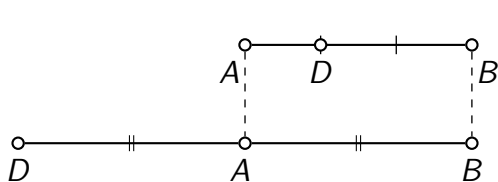
Dijeljenje dužine u zadanom omjeru



$$\frac{|AD|}{|BD|} = \frac{1}{2}$$

$$\frac{|AD|}{|BD|} = \frac{1}{2}$$

Dijeljenje dužine u zadanom omjeru

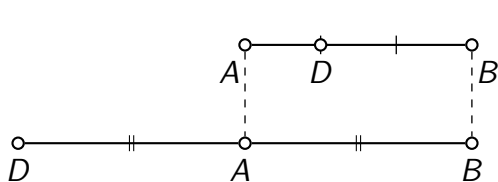


$$\frac{|AD|}{|BD|} = \frac{1}{2}$$

iznutra

$$\frac{|AD|}{|BD|} = \frac{1}{2}$$

Dijeljenje dužine u zadanom omjeru



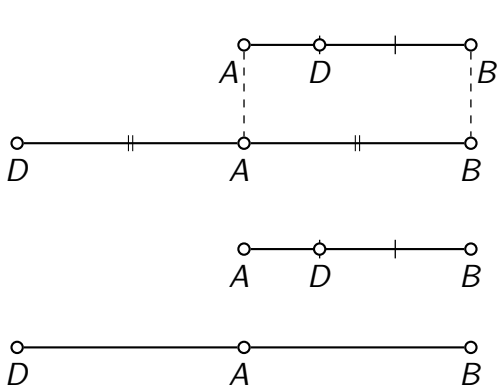
$$\frac{|AD|}{|BD|} = \frac{1}{2}$$

iznutra

$$\frac{|AD|}{|BD|} = \frac{1}{2}$$

izvana

Dijeljenje dužine u zadanom omjeru



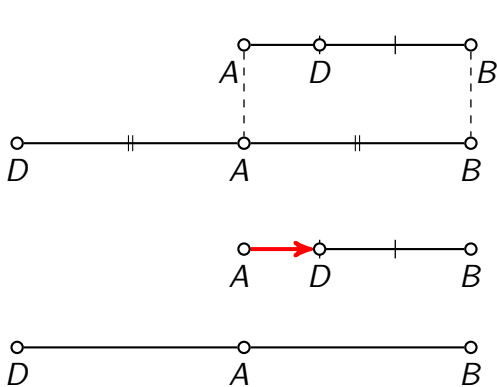
$$\frac{|AD|}{|BD|} = \frac{1}{2}$$

iznutra

$$\frac{|AD|}{|BD|} = \frac{1}{2}$$

izvana

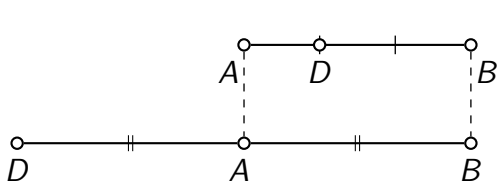
Dijeljenje dužine u zadanom omjeru



$$\frac{|AD|}{|BD|} = \frac{1}{2} \quad \text{iznutra}$$

$$\frac{|AD|}{|BD|} = \frac{1}{2} \quad \text{izvana}$$

Dijeljenje dužine u zadanom omjeru

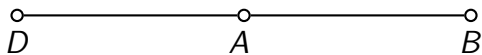


$$\frac{|AD|}{|BD|} = \frac{1}{2}$$

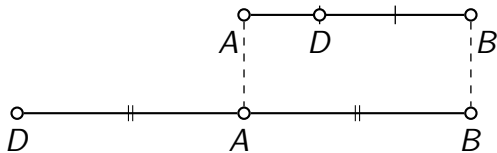
iznutra

$$\frac{|AD|}{|BD|} = \frac{1}{2}$$

izvana



Dijeljenje dužine u zadanom omjeru

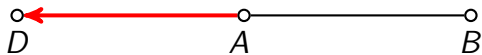


$$\frac{|AD|}{|BD|} = \frac{1}{2}$$

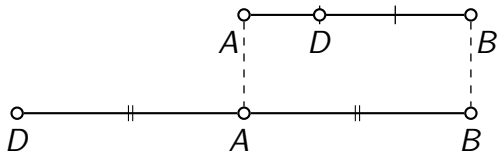
iznutra

$$\frac{|AD|}{|BD|} = \frac{1}{2}$$

izvana



Dijeljenje dužine u zadanom omjeru



$$\frac{|AD|}{|BD|} = \frac{1}{2}$$

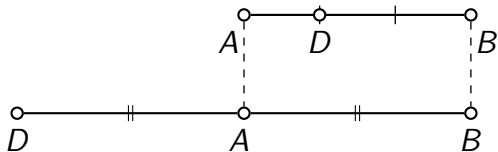
iznutra

$$\frac{|AD|}{|BD|} = \frac{1}{2}$$

izvana

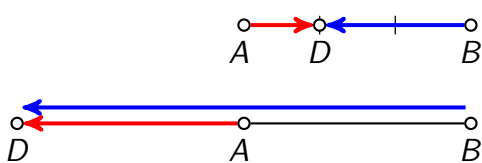


Dijeljenje dužine u zadanom omjeru



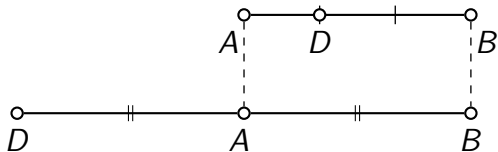
$$\frac{|AD|}{|BD|} = \frac{1}{2} \quad \text{iznutra}$$

$$\frac{|AD|}{|BD|} = \frac{1}{2} \quad \text{izvana}$$



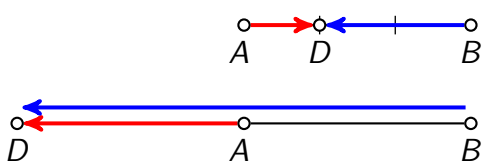
$$\overrightarrow{AD} =$$

Dijeljenje dužine u zadanom omjeru



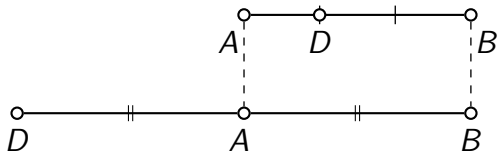
$$\frac{|AD|}{|BD|} = \frac{1}{2} \quad \text{iznutra}$$

$$\frac{|AD|}{|BD|} = \frac{1}{2} \quad \text{izvana}$$



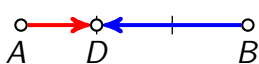
$$\vec{AD} = -\frac{1}{2}\vec{BD}$$

Dijeljenje dužine u zadanom omjeru



$$\frac{|AD|}{|BD|} = \frac{1}{2} \quad \text{iznutra}$$

$$\frac{|AD|}{|BD|} = \frac{1}{2} \quad \text{izvana}$$

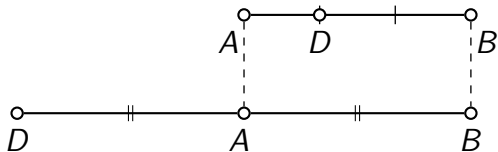


$$\vec{AD} = -\frac{1}{2}\vec{BD}$$



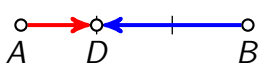
$$\vec{AD} =$$

Dijeljenje dužine u zadanom omjeru

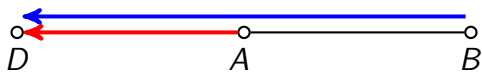


$$\frac{|AD|}{|BD|} = \frac{1}{2} \quad \text{iznutra}$$

$$\frac{|AD|}{|BD|} = \frac{1}{2} \quad \text{izvana}$$

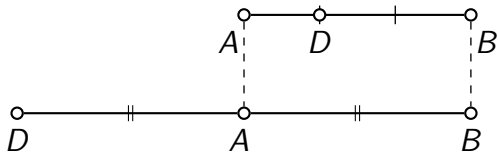


$$\vec{AD} = -\frac{1}{2}\vec{BD}$$



$$\vec{AD} = \frac{1}{2}\vec{BD}$$

Dijeljenje dužine u zadanom omjeru



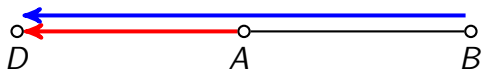
$$\frac{|AD|}{|BD|} = \frac{1}{2} \quad \text{iznutra}$$

$$\frac{|AD|}{|BD|} = \frac{1}{2} \quad \text{izvana}$$

1. način

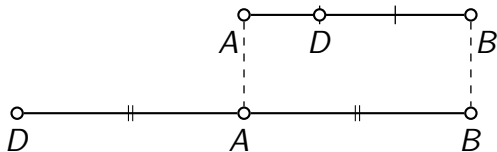


$$\vec{AD} = -\frac{1}{2}\vec{BD}$$



$$\vec{AD} = \frac{1}{2}\vec{BD}$$


Dijeljenje dužine u zadanom omjeru



$$\frac{|AD|}{|BD|} = \frac{1}{2} \quad \text{iznutra}$$

$$\frac{|AD|}{|BD|} = \frac{1}{2} \quad \text{izvana}$$

1. način

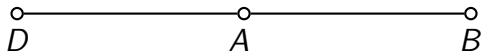
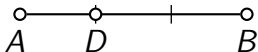


$$\vec{AD} = -\frac{1}{2}\vec{BD}$$

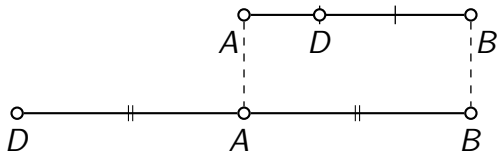


$$\vec{AD} = \frac{1}{2}\vec{BD}$$

2. način



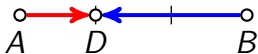
Dijeljenje dužine u zadanom omjeru



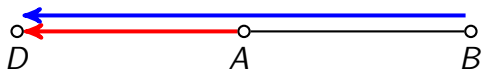
$$\frac{|AD|}{|BD|} = \frac{1}{2} \quad \text{iznutra}$$

$$\frac{|AD|}{|BD|} = \frac{1}{2} \quad \text{izvana}$$

1. način

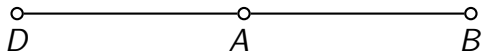
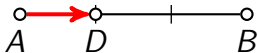


$$\vec{AD} = -\frac{1}{2}\vec{BD}$$

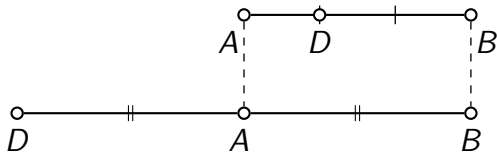


$$\vec{AD} = \frac{1}{2}\vec{BD}$$

2. način



Dijeljenje dužine u zadanom omjeru



$$\frac{|AD|}{|BD|} = \frac{1}{2} \quad \text{iznutra}$$

$$\frac{|AD|}{|BD|} = \frac{1}{2} \quad \text{izvana}$$

1. način

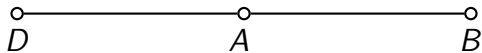



$$\vec{AD} = -\frac{1}{2}\vec{BD}$$

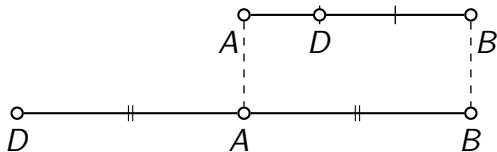


$$\vec{AD} = \frac{1}{2}\vec{BD}$$

2. način




Dijeljenje dužine u zadanom omjeru



$$\frac{|AD|}{|BD|} = \frac{1}{2} \quad \text{iznutra}$$

$$\frac{|AD|}{|BD|} = \frac{1}{2} \quad \text{izvana}$$

1. način

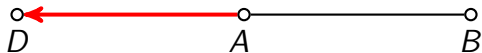



$$\vec{AD} = -\frac{1}{2}\vec{BD}$$

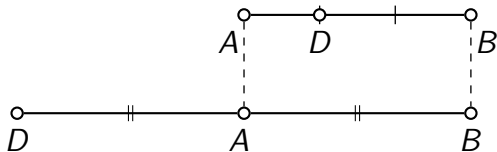


$$\vec{AD} = \frac{1}{2}\vec{BD}$$

2. način




Dijeljenje dužine u zadanom omjeru



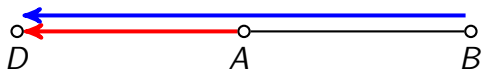
$$\frac{|AD|}{|BD|} = \frac{1}{2} \quad \text{iznutra}$$

$$\frac{|AD|}{|BD|} = \frac{1}{2} \quad \text{izvana}$$

1. način

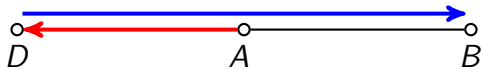



$$\vec{AD} = -\frac{1}{2}\vec{BD}$$

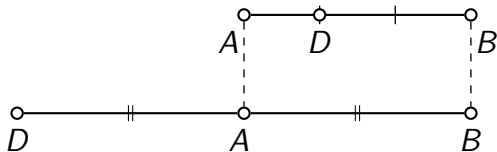


$$\vec{AD} = \frac{1}{2}\vec{BD}$$

2. način



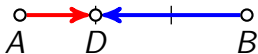
Dijeljenje dužine u zadanom omjeru



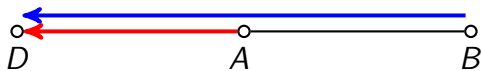
$$\frac{|AD|}{|BD|} = \frac{1}{2} \quad \text{iznutra}$$

$$\frac{|AD|}{|BD|} = \frac{1}{2} \quad \text{izvana}$$

1. način




$$\vec{AD} = -\frac{1}{2}\vec{BD}$$

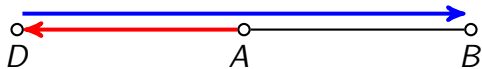


$$\vec{AD} = \frac{1}{2}\vec{BD}$$

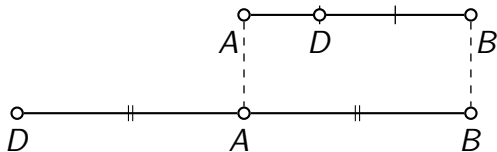
2. način



$$\vec{AD} =$$




Dijeljenje dužine u zadanom omjeru



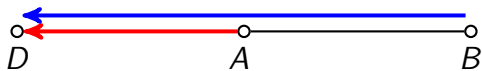
$$\frac{|AD|}{|BD|} = \frac{1}{2} \quad \text{iznutra}$$

$$\frac{|AD|}{|BD|} = \frac{1}{2} \quad \text{izvana}$$

1. način




$$\vec{AD} = -\frac{1}{2}\vec{BD}$$

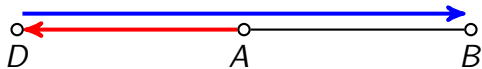


$$\vec{AD} = \frac{1}{2}\vec{BD}$$

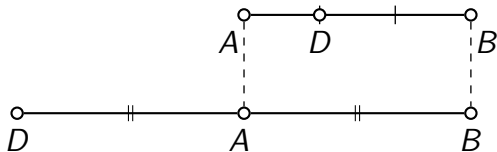
2. način



$$\vec{AD} = \frac{1}{2}\vec{DB}$$



Dijeljenje dužine u zadanom omjeru



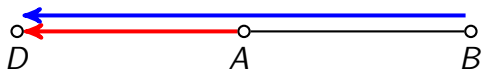
$$\frac{|AD|}{|BD|} = \frac{1}{2} \quad \text{iznutra}$$

$$\frac{|AD|}{|BD|} = \frac{1}{2} \quad \text{izvana}$$

1. način




$$\vec{AD} = -\frac{1}{2}\vec{BD}$$

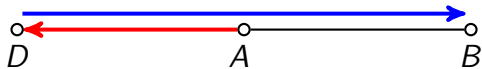


$$\vec{AD} = \frac{1}{2}\vec{BD}$$

2. način

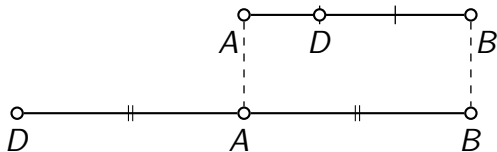


$$\vec{AD} = \frac{1}{2}\vec{DB}$$



$$\vec{AD} =$$


Dijeljenje dužine u zadanom omjeru



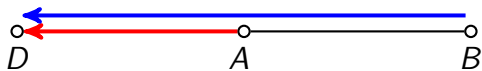
$$\frac{|AD|}{|BD|} = \frac{1}{2} \quad \text{iznutra}$$

$$\frac{|AD|}{|BD|} = \frac{1}{2} \quad \text{izvana}$$

1. način




$$\vec{AD} = -\frac{1}{2}\vec{BD}$$



$$\vec{AD} = \frac{1}{2}\vec{BD}$$

2. način



$$\vec{AD} = \frac{1}{2}\vec{DB}$$



$$\vec{AD} = -\frac{1}{2}\vec{DB}$$

1. način

Kažemo da točka D dijeli dužinu \overline{AB} u omjeru λ ako je $\overrightarrow{AD} = \lambda \overrightarrow{BD}$.

1. način

Kažemo da točka D dijeli dužinu \overline{AB} u omjeru λ ako je $\overrightarrow{AD} = \lambda \overrightarrow{BD}$.

Ako je $\lambda < 0$, točka D se nalazi unutar dužine \overline{AB} .

1. način

Kažemo da točka D dijeli dužinu \overline{AB} u omjeru λ ako je $\overrightarrow{AD} = \lambda \overrightarrow{BD}$.

Ako je $\lambda < 0$, točka D se nalazi unutar dužine \overline{AB} .

Ako je $\lambda > 0$, točka D se nalazi izvan dužine \overline{AB} .

1. način

Kažemo da točka D dijeli dužinu \overline{AB} u omjeru λ ako je $\overrightarrow{AD} = \lambda \overrightarrow{BD}$.

Ako je $\lambda < 0$, točka D se nalazi unutar dužine \overline{AB} .

Ako je $\lambda > 0$, točka D se nalazi izvan dužine \overline{AB} .

2. način

1. način

Kažemo da točka D dijeli dužinu \overline{AB} u omjeru λ ako je $\overrightarrow{AD} = \lambda \overrightarrow{BD}$.

Ako je $\lambda < 0$, točka D se nalazi unutar dužine \overline{AB} .

Ako je $\lambda > 0$, točka D se nalazi izvan dužine \overline{AB} .

2. način

Kažemo da točka D dijeli dužinu \overline{AB} u omjeru λ ako je $\overrightarrow{AD} = \lambda \overrightarrow{DB}$.

1. način

Kažemo da točka D dijeli dužinu \overline{AB} u omjeru λ ako je $\overrightarrow{AD} = \lambda \overrightarrow{BD}$.

Ako je $\lambda < 0$, točka D se nalazi unutar dužine \overline{AB} .

Ako je $\lambda > 0$, točka D se nalazi izvan dužine \overline{AB} .

2. način

Kažemo da točka D dijeli dužinu \overline{AB} u omjeru λ ako je $\overrightarrow{AD} = \lambda \overrightarrow{DB}$.

Ako je $\lambda > 0$, točka D se nalazi unutar dužine \overline{AB} .

1. način

Kažemo da točka D dijeli dužinu \overline{AB} u omjeru λ ako je $\overrightarrow{AD} = \lambda \overrightarrow{BD}$.

Ako je $\lambda < 0$, točka D se nalazi unutar dužine \overline{AB} .

Ako je $\lambda > 0$, točka D se nalazi izvan dužine \overline{AB} .

2. način

Kažemo da točka D dijeli dužinu \overline{AB} u omjeru λ ako je $\overrightarrow{AD} = \lambda \overrightarrow{DB}$.

Ako je $\lambda > 0$, točka D se nalazi unutar dužine \overline{AB} .

Ako je $\lambda < 0$, točka D se nalazi izvan dužine \overline{AB} .

1. način  koristit ćemo ovaj pristup

Kažemo da točka D dijeli dužinu \overline{AB} u omjeru λ ako je $\overrightarrow{AD} = \lambda \overrightarrow{BD}$.

Ako je $\lambda < 0$, točka D se nalazi unutar dužine \overline{AB} .

Ako je $\lambda > 0$, točka D se nalazi izvan dužine \overline{AB} .


2. način

Kažemo da točka D dijeli dužinu \overline{AB} u omjeru λ ako je $\overrightarrow{AD} = \lambda \overrightarrow{DB}$.


Ako je $\lambda > 0$, točka D se nalazi unutar dužine \overline{AB} .

Ako je $\lambda < 0$, točka D se nalazi izvan dužine \overline{AB} .

$$\lambda = 0$$




$$\lambda = 0$$



$$\vec{AD} = \lambda \vec{BD}$$


$$\lambda = 0$$



$$\vec{AD} = \lambda \vec{BD}$$

$$\vec{AD} = 0 \cdot \vec{BD}$$

$$\lambda = 0$$




$$\vec{AD} = \lambda \vec{BD}$$

$$\vec{AD} = 0 \cdot \vec{BD}$$

$$\vec{AD} = \vec{0}$$

$$\lambda = 0$$



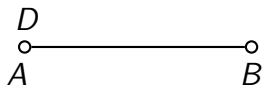
$$\overrightarrow{AD} = \lambda \overrightarrow{BD}$$

$$\overrightarrow{AD} = 0 \cdot \overrightarrow{BD}$$

$$\overrightarrow{AD} = \vec{0}$$

$$D = A$$

$$\lambda = 0$$



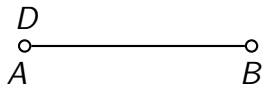
$$\vec{AD} = \lambda \vec{BD}$$

$$\vec{AD} = 0 \cdot \vec{BD}$$

$$\vec{AD} = \vec{0}$$

$$D = A$$

$$\lambda = 0$$




$$\vec{AD} = \lambda \vec{BD}$$

$$\vec{AD} = 0 \cdot \vec{BD}$$

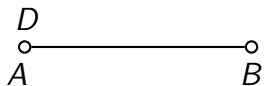
$$\vec{AD} = \vec{0}$$

$$D = A$$

polovište



$$\lambda = 0$$



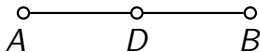
$$\vec{AD} = \lambda \vec{BD}$$

$$\vec{AD} = 0 \cdot \vec{BD}$$

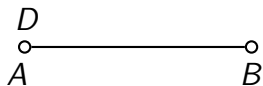
$$\vec{AD} = \vec{0}$$

$$D = A$$

polovište



$$\lambda = 0$$



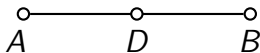
$$\vec{AD} = \lambda \vec{BD}$$

$$\vec{AD} = 0 \cdot \vec{BD}$$

$$\vec{AD} = \vec{0}$$

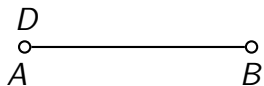
$$D = A$$

polovište



$$\vec{AD} = \lambda \vec{BD}$$

$$\lambda = 0$$



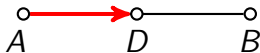
$$\vec{AD} = \lambda \vec{BD}$$

$$\vec{AD} = 0 \cdot \vec{BD}$$

$$\vec{AD} = \vec{0}$$

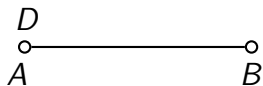
$$D = A$$

polovište



$$\vec{AD} = \lambda \vec{BD}$$

$$\lambda = 0$$



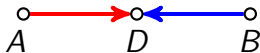
$$\vec{AD} = \lambda \vec{BD}$$

$$\vec{AD} = 0 \cdot \vec{BD}$$

$$\vec{AD} = \vec{0}$$

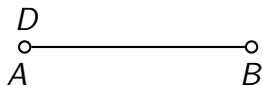
$$D = A$$

polovište



$$\vec{AD} = \lambda \vec{BD}$$

$$\lambda = 0$$



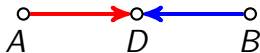
$$\vec{AD} = \lambda \vec{BD}$$

$$\vec{AD} = 0 \cdot \vec{BD}$$

$$\vec{AD} = \vec{0}$$

$$D = A$$

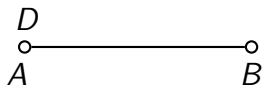
polovište



$$\vec{AD} = \lambda \vec{BD}$$

$$\vec{AD} = -\vec{BD}$$

$$\lambda = 0$$



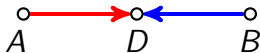
$$\vec{AD} = \lambda \vec{BD}$$

$$\vec{AD} = 0 \cdot \vec{BD}$$

$$\vec{AD} = \vec{0}$$

$$D = A$$

polovište

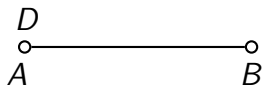


$$\vec{AD} = \lambda \vec{BD}$$

$$\vec{AD} = -\vec{BD}$$

$$\lambda = -1$$

$$\lambda = 0$$



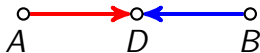
$$\vec{AD} = \lambda \vec{BD}$$

$$\vec{AD} = 0 \cdot \vec{BD}$$

$$\vec{AD} = \vec{0}$$

$$D = A$$

polovište

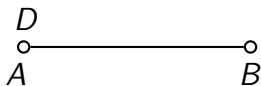


$$\vec{AD} = \lambda \vec{BD}$$

$$\vec{AD} = -\vec{BD}$$

$$\lambda = -1$$

$$\lambda = 0$$



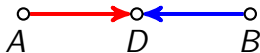
$$\vec{AD} = \lambda \vec{BD}$$

$$\vec{AD} = 0 \cdot \vec{BD}$$

$$\vec{AD} = \vec{0}$$

$$D = A$$

polovište




$$\vec{AD} = \lambda \vec{BD}$$

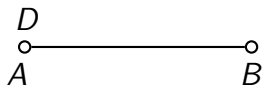
$$\vec{AD} = -\vec{BD}$$

$$\lambda = -1$$

$$\lambda = 1$$



$$\lambda = 0$$



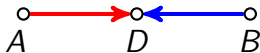
$$\vec{AD} = \lambda \vec{BD}$$

$$\vec{AD} = 0 \cdot \vec{BD}$$

$$\vec{AD} = \vec{0}$$

$$D = A$$

polovište



$$\vec{AD} = \lambda \vec{BD}$$

$$\vec{AD} = -\vec{BD}$$

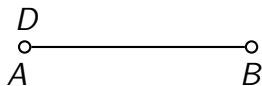
$$\lambda = -1$$

$$\lambda = 1$$



$$\vec{AD} = \lambda \vec{BD}$$

$$\lambda = 0$$



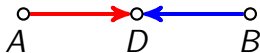
$$\vec{AD} = \lambda \vec{BD}$$

$$\vec{AD} = 0 \cdot \vec{BD}$$

$$\vec{AD} = \vec{0}$$

$$D = A$$

polovište



$$\vec{AD} = \lambda \vec{BD}$$

$$\vec{AD} = -\vec{BD}$$

$$\lambda = -1$$

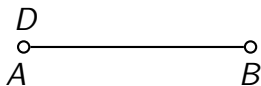
$$\lambda = 1$$



$$\vec{AD} = \lambda \vec{BD}$$

$$\vec{AD} = \vec{BD}$$

$$\lambda = 0$$



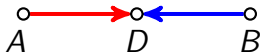
$$\vec{AD} = \lambda \vec{BD}$$

$$\vec{AD} = 0 \cdot \vec{BD}$$

$$\vec{AD} = \vec{0}$$

$$D = A$$

polovište



$$\vec{AD} = \lambda \vec{BD}$$

$$\vec{AD} = -\vec{BD}$$

$$\lambda = -1$$

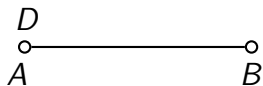
$$\lambda = 1$$



$$\vec{AD} = \lambda \vec{BD}$$

$$\vec{AD} = \vec{BD}$$

$$\lambda = 0$$



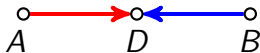
$$\vec{AD} = \lambda \vec{BD}$$

$$\vec{AD} = 0 \cdot \vec{BD}$$

$$\vec{AD} = \vec{0}$$

$$D = A$$

polovište



$$\vec{AD} = \lambda \vec{BD}$$

$$\vec{AD} = -\vec{BD}$$

$$\lambda = -1$$

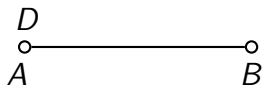
$$\lambda = 1$$



$$\vec{AD} = \lambda \vec{BD}$$

$$\vec{AD} = \vec{BD}$$

$$\lambda = 0$$



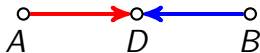
$$\vec{AD} = \lambda \vec{BD}$$

$$\vec{AD} = 0 \cdot \vec{BD}$$

$$\vec{AD} = \vec{0}$$

$$D = A$$

polovište




$$\vec{AD} = \lambda \vec{BD}$$

$$\vec{AD} = -\vec{BD}$$

$$\lambda = -1$$

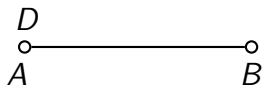
$$\lambda = 1$$



$$\vec{AD} = \lambda \vec{BD}$$

$$\vec{AD} = \vec{BD}$$

$$\lambda = 0$$



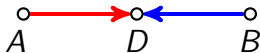
$$\vec{AD} = \lambda \vec{BD}$$

$$\vec{AD} = 0 \cdot \vec{BD}$$

$$\vec{AD} = \vec{0}$$

$$D = A$$

polovište




$$\vec{AD} = \lambda \vec{BD}$$

$$\vec{AD} = -\vec{BD}$$

$$\lambda = -1$$

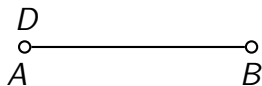
$$\lambda = 1$$



$$\vec{AD} = \lambda \vec{BD}$$

$$\vec{AD} = \vec{BD}$$

$$\lambda = 0$$



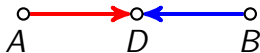
$$\vec{AD} = \lambda \vec{BD}$$

$$\vec{AD} = 0 \cdot \vec{BD}$$

$$\vec{AD} = \vec{0}$$

$$D = A$$

polovište




$$\vec{AD} = \lambda \vec{BD}$$

$$\vec{AD} = -\vec{BD}$$

$$\lambda = -1$$

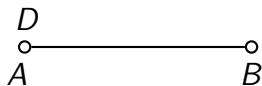
$$\lambda = 1$$



$$\vec{AD} = \lambda \vec{BD}$$

$$\vec{AD} = \vec{BD}$$

$$\lambda = 0$$



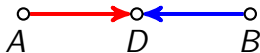
$$\vec{AD} = \lambda \vec{BD}$$

$$\vec{AD} = 0 \cdot \vec{BD}$$

$$\vec{AD} = \vec{0}$$

$$D = A$$

polovište




$$\vec{AD} = \lambda \vec{BD}$$

$$\vec{AD} = -\vec{BD}$$

$$\lambda = -1$$

$$\lambda = 1$$

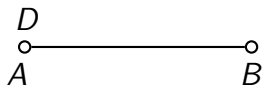


$$\vec{AD} = \lambda \vec{BD}$$

$$\vec{AD} = \vec{BD}$$

Hm?

$$\lambda = 0$$



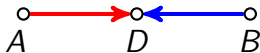
$$\vec{AD} = \lambda \vec{BD}$$

$$\vec{AD} = 0 \cdot \vec{BD}$$

$$\vec{AD} = \vec{0}$$

$$D = A$$

polovište




$$\vec{AD} = \lambda \vec{BD}$$

$$\vec{AD} = -\vec{BD}$$

$$\lambda = -1$$

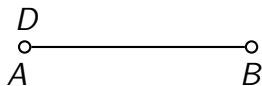
$$\lambda = 1$$



$$\vec{AD} = \lambda \vec{BD}$$

$$\vec{AD} = \vec{BD}$$

$$\lambda = 0$$



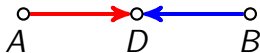
$$\vec{AD} = \lambda \vec{BD}$$

$$\vec{AD} = 0 \cdot \vec{BD}$$

$$\vec{AD} = \vec{0}$$

$$D = A$$

polovište



$$\vec{AD} = \lambda \vec{BD}$$

$$\vec{AD} = -\vec{BD}$$

$$\lambda = -1$$

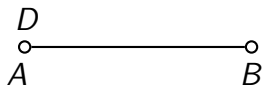
$$\lambda = 1$$



$$\vec{AD} = \lambda \vec{BD}$$

$$\vec{AD} = \vec{BD}$$

$$\lambda = 0$$



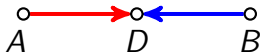
$$\vec{AD} = \lambda \vec{BD}$$

$$\vec{AD} = 0 \cdot \vec{BD}$$

$$\vec{AD} = \vec{0}$$

$$D = A$$

polovište




$$\vec{AD} = \lambda \vec{BD}$$

$$\vec{AD} = -\vec{BD}$$

$$\lambda = -1$$

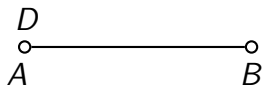
$$\lambda = 1$$



$$\vec{AD} = \lambda \vec{BD}$$

$$\vec{AD} = \vec{BD}$$

$$\lambda = 0$$



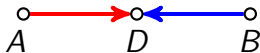
$$\vec{AD} = \lambda \vec{BD}$$

$$\vec{AD} = 0 \cdot \vec{BD}$$

$$\vec{AD} = \vec{0}$$

$$D = A$$

polovište




$$\vec{AD} = \lambda \vec{BD}$$

$$\vec{AD} = -\vec{BD}$$

$$\lambda = -1$$

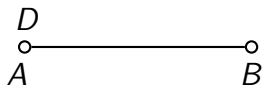
$$\lambda = 1$$



$$\vec{AD} = \lambda \vec{BD}$$

$$\vec{AD} = \vec{BD}$$

$$\lambda = 0$$



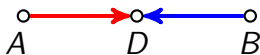
$$\vec{AD} = \lambda \vec{BD}$$

$$\vec{AD} = 0 \cdot \vec{BD}$$

$$\vec{AD} = \vec{0}$$

$$D = A$$

polovište




$$\vec{AD} = \lambda \vec{BD}$$

$$\vec{AD} = -\vec{BD}$$

$$\lambda = -1$$

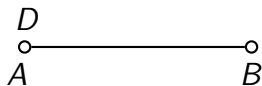
$$\lambda = 1$$



$$\vec{AD} = \lambda \vec{BD}$$

$$\vec{AD} = \vec{BD}$$

$$\lambda = 0$$



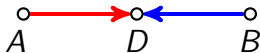
$$\vec{AD} = \lambda \vec{BD}$$

$$\vec{AD} = 0 \cdot \vec{BD}$$

$$\vec{AD} = \vec{0}$$

$$D = A$$

polovište




$$\vec{AD} = \lambda \vec{BD}$$

$$\vec{AD} = -\vec{BD}$$

$$\lambda = -1$$

$$\lambda = 1$$

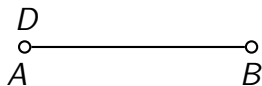


$$\vec{AD} = \lambda \vec{BD}$$

$$\vec{AD} = \vec{BD}$$

Hm?

$$\lambda = 0$$



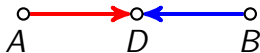
$$\vec{AD} = \lambda \vec{BD}$$

$$\vec{AD} = 0 \cdot \vec{BD}$$

$$\vec{AD} = \vec{0}$$

$$D = A$$

polovište




$$\vec{AD} = \lambda \vec{BD}$$

$$\vec{AD} = -\vec{BD}$$

$$\lambda = -1$$

$$\lambda = 1$$

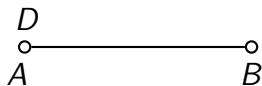


$$\vec{AD} = \lambda \vec{BD}$$

$$\vec{AD} = \vec{BD}$$

Točka D , javi se! Gdje si?

$$\lambda = 0$$



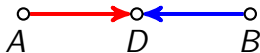
$$\vec{AD} = \lambda \vec{BD}$$

$$\vec{AD} = 0 \cdot \vec{BD}$$

$$\vec{AD} = \vec{0}$$

$$D = A$$

polovište




$$\vec{AD} = \lambda \vec{BD}$$

$$\vec{AD} = -\vec{BD}$$

$$\lambda = -1$$

$$\lambda = 1$$



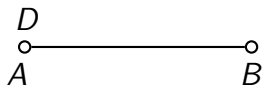
Hej! Javljam se iz beskonačnosti.

$$\vec{AD} = \lambda \vec{BD}$$

$$\vec{AD} = \vec{BD}$$

Točka D , javi se! Gdje si?

$$\lambda = 0$$



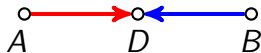
$$\vec{AD} = \lambda \vec{BD}$$

$$\vec{AD} = 0 \cdot \vec{BD}$$

$$\vec{AD} = \vec{0}$$

$$D = A$$

polovište




$$\vec{AD} = \lambda \vec{BD}$$

$$\vec{AD} = -\vec{BD}$$

$$\lambda = -1$$

$$\lambda = 1$$

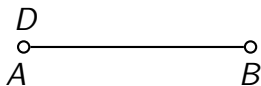


$$\vec{AD} = \lambda \vec{BD}$$

$$\vec{AD} = \vec{BD}$$

Točka D je beskonačno daleka točka na pravcu AB .

$$\lambda = 0$$



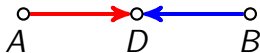
$$\vec{AD} = \lambda \vec{BD}$$

$$\vec{AD} = 0 \cdot \vec{BD}$$

$$\vec{AD} = \vec{0}$$

$$D = A$$

polovište




$$\vec{AD} = \lambda \vec{BD}$$

$$\vec{AD} = -\vec{BD}$$

$$\lambda = -1$$

$$\lambda = 1$$

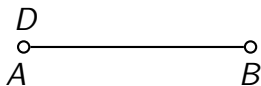


$$\vec{AD} = \lambda \vec{BD}$$

$$\vec{AD} = \vec{BD}$$

Točka D je beskonačno daleka točka na pravcu AB .

$$\lambda = 0$$



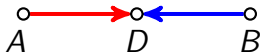
$$\vec{AD} = \lambda \vec{BD}$$

$$\vec{AD} = 0 \cdot \vec{BD}$$

$$\vec{AD} = \vec{0}$$

$$D = A$$

polovište

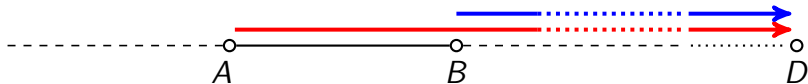


$$\vec{AD} = \lambda \vec{BD}$$

$$\vec{AD} = -\vec{BD}$$

$$\lambda = -1$$

$$\lambda = 1$$




$$\vec{AD} = \lambda \vec{BD}$$

$$\vec{AD} = \vec{BD}$$

Točka D je beskonačno daleka točka na pravcu AB .


Primjer

$$\overrightarrow{AD} = -\frac{2}{5}\overrightarrow{BD}$$



Primjer


$$\overrightarrow{AD} = -\frac{2}{5}\overrightarrow{BD}$$



$$\frac{|AD|}{|BD|} = \frac{2}{5}$$

Primjer

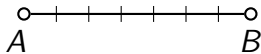
$$\overrightarrow{AD} = -\frac{2}{5}\overrightarrow{BD}$$



$$\frac{|AD|}{|BD|} = \frac{2}{5} \quad 5 + 2 = 7$$

Primjer

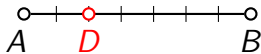
$$\vec{AD} = -\frac{2}{5}\vec{BD}$$



$$\frac{|AD|}{|BD|} = \frac{2}{5} \quad 5 + 2 = 7$$

Primjer

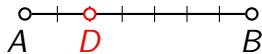
$$\overrightarrow{AD} = -\frac{2}{5}\overrightarrow{BD}$$



$$\frac{|AD|}{|BD|} = \frac{2}{5} \quad 5 + 2 = 7$$


Primjer

$$\vec{AD} = -\frac{2}{5}\vec{BD}$$



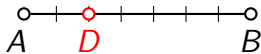
$$\frac{|AD|}{|BD|} = \frac{2}{5} \quad 5 + 2 = 7$$

$$\vec{AD} = \frac{2}{5}\vec{BD}$$




Primjer

$$\vec{AD} = -\frac{2}{5}\vec{BD}$$



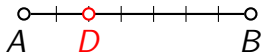
$$\frac{|AD|}{|BD|} = \frac{2}{5} \quad 5 + 2 = 7$$

$$\vec{AD} = \frac{2}{5}\vec{BD}$$




Primjer

$$\vec{AD} = -\frac{2}{5}\vec{BD}$$



$$\frac{|AD|}{|BD|} = \frac{2}{5} \quad 5 + 2 = 7$$

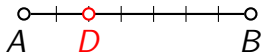
$$\vec{AD} = \frac{2}{5}\vec{BD}$$



$$\frac{|AD|}{|BD|} = \frac{2}{5}$$


Primjer

$$\vec{AD} = -\frac{2}{5}\vec{BD}$$



$$\frac{|AD|}{|BD|} = \frac{2}{5} \quad 5 + 2 = 7$$

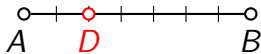
$$\vec{AD} = \frac{2}{5}\vec{BD}$$



$$\frac{|AD|}{|BD|} = \frac{2}{5} \quad 5 - 2 = 3$$


Primjer

$$\vec{AD} = -\frac{2}{5}\vec{BD}$$



$$\frac{|AD|}{|BD|} = \frac{2}{5} \quad 5 + 2 = 7$$

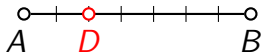
$$\vec{AD} = \frac{2}{5}\vec{BD}$$



$$\frac{|AD|}{|BD|} = \frac{2}{5} \quad 5 - 2 = 3$$


Primjer

$$\vec{AD} = -\frac{2}{5}\vec{BD}$$



$$\frac{|AD|}{|BD|} = \frac{2}{5} \quad 5 + 2 = 7$$

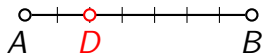
$$\vec{AD} = \frac{2}{5}\vec{BD}$$



$$\frac{|AD|}{|BD|} = \frac{2}{5} \quad 5 - 2 = 3$$


Primjer

$$\vec{AD} = -\frac{2}{5}\vec{BD}$$



$$\frac{|AD|}{|BD|} = \frac{2}{5} \quad 5 + 2 = 7$$

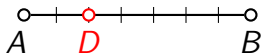
$$\vec{AD} = \frac{2}{5}\vec{BD}$$



$$\frac{|AD|}{|BD|} = \frac{2}{5} \quad 5 - 2 = 3$$


Primjer

$$\vec{AD} = -\frac{2}{5}\vec{BD}$$




$$\frac{|AD|}{|BD|} = \frac{2}{5} \quad 5 + 2 = 7$$

$$\vec{AD} = \frac{2}{5}\vec{BD}$$



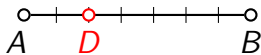
$$\frac{|AD|}{|BD|} = \frac{2}{5} \quad 5 - 2 = 3$$

$$\vec{AD} = -\frac{5}{2}\vec{BD}$$




Primjer

$$\vec{AD} = -\frac{2}{5}\vec{BD}$$



$$\frac{|AD|}{|BD|} = \frac{2}{5} \quad 5 + 2 = 7$$

$$\vec{AD} = \frac{2}{5}\vec{BD}$$



$$\frac{|AD|}{|BD|} = \frac{2}{5} \quad 5 - 2 = 3$$

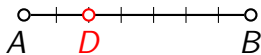
$$\vec{AD} = -\frac{5}{2}\vec{BD}$$



$$\frac{|AD|}{|BD|} = \frac{5}{2}$$


Primjer

$$\vec{AD} = -\frac{2}{5}\vec{BD}$$



$$\frac{|AD|}{|BD|} = \frac{2}{5} \quad 5 + 2 = 7$$

$$\vec{AD} = \frac{2}{5}\vec{BD}$$



$$\frac{|AD|}{|BD|} = \frac{2}{5} \quad 5 - 2 = 3$$

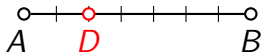
$$\vec{AD} = -\frac{5}{2}\vec{BD}$$



$$\frac{|AD|}{|BD|} = \frac{5}{2} \quad 5 + 2 = 7$$


Primjer

$$\vec{AD} = -\frac{2}{5}\vec{BD}$$



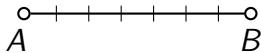
$$\frac{|AD|}{|BD|} = \frac{2}{5} \quad 5 + 2 = 7$$

$$\vec{AD} = \frac{2}{5}\vec{BD}$$



$$\frac{|AD|}{|BD|} = \frac{2}{5} \quad 5 - 2 = 3$$

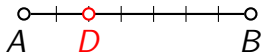
$$\vec{AD} = -\frac{5}{2}\vec{BD}$$



$$\frac{|AD|}{|BD|} = \frac{5}{2} \quad 5 + 2 = 7$$


Primjer

$$\vec{AD} = -\frac{2}{5}\vec{BD}$$



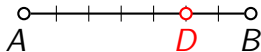
$$\frac{|AD|}{|BD|} = \frac{2}{5} \quad 5 + 2 = 7$$

$$\vec{AD} = \frac{2}{5}\vec{BD}$$



$$\frac{|AD|}{|BD|} = \frac{2}{5} \quad 5 - 2 = 3$$

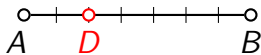
$$\vec{AD} = -\frac{5}{2}\vec{BD}$$



$$\frac{|AD|}{|BD|} = \frac{5}{2} \quad 5 + 2 = 7$$


Primjer

$$\vec{AD} = -\frac{2}{5}\vec{BD}$$



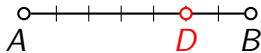
$$\frac{|AD|}{|BD|} = \frac{2}{5} \quad 5 + 2 = 7$$

$$\vec{AD} = \frac{2}{5}\vec{BD}$$



$$\frac{|AD|}{|BD|} = \frac{2}{5} \quad 5 - 2 = 3$$

$$\vec{AD} = -\frac{5}{2}\vec{BD}$$



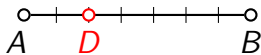
$$\frac{|AD|}{|BD|} = \frac{5}{2} \quad 5 + 2 = 7$$

$$\vec{AD} = \frac{5}{2}\vec{BD}$$




Primjer

$$\vec{AD} = -\frac{2}{5}\vec{BD}$$



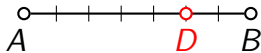
$$\frac{|AD|}{|BD|} = \frac{2}{5} \quad 5 + 2 = 7$$

$$\vec{AD} = \frac{2}{5}\vec{BD}$$



$$\frac{|AD|}{|BD|} = \frac{2}{5} \quad 5 - 2 = 3$$

$$\vec{AD} = -\frac{5}{2}\vec{BD}$$



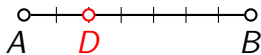
$$\frac{|AD|}{|BD|} = \frac{5}{2} \quad 5 + 2 = 7$$

$$\vec{AD} = \frac{5}{2}\vec{BD}$$




Primjer

$$\vec{AD} = -\frac{2}{5}\vec{BD}$$



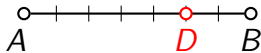
$$\frac{|AD|}{|BD|} = \frac{2}{5} \quad 5 + 2 = 7$$

$$\vec{AD} = \frac{2}{5}\vec{BD}$$



$$\frac{|AD|}{|BD|} = \frac{2}{5} \quad 5 - 2 = 3$$

$$\vec{AD} = -\frac{5}{2}\vec{BD}$$



$$\frac{|AD|}{|BD|} = \frac{5}{2} \quad 5 + 2 = 7$$

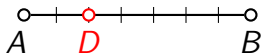
$$\vec{AD} = \frac{5}{2}\vec{BD}$$



$$\frac{|AD|}{|BD|} = \frac{5}{2}$$


Primjer

$$\vec{AD} = -\frac{2}{5}\vec{BD}$$



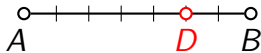
$$\frac{|AD|}{|BD|} = \frac{2}{5} \quad 5 + 2 = 7$$

$$\vec{AD} = \frac{2}{5}\vec{BD}$$



$$\frac{|AD|}{|BD|} = \frac{2}{5} \quad 5 - 2 = 3$$

$$\vec{AD} = -\frac{5}{2}\vec{BD}$$



$$\frac{|AD|}{|BD|} = \frac{5}{2} \quad 5 + 2 = 7$$

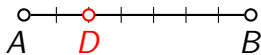
$$\vec{AD} = \frac{5}{2}\vec{BD}$$



$$\frac{|AD|}{|BD|} = \frac{5}{2} \quad 5 - 2 = 3$$


Primjer

$$\vec{AD} = -\frac{2}{5}\vec{BD}$$



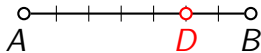
$$\frac{|AD|}{|BD|} = \frac{2}{5} \quad 5 + 2 = 7$$

$$\vec{AD} = \frac{2}{5}\vec{BD}$$



$$\frac{|AD|}{|BD|} = \frac{2}{5} \quad 5 - 2 = 3$$

$$\vec{AD} = -\frac{5}{2}\vec{BD}$$



$$\frac{|AD|}{|BD|} = \frac{5}{2} \quad 5 + 2 = 7$$

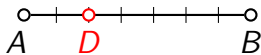
$$\vec{AD} = \frac{5}{2}\vec{BD}$$



$$\frac{|AD|}{|BD|} = \frac{5}{2} \quad 5 - 2 = 3$$


Primjer

$$\vec{AD} = -\frac{2}{5}\vec{BD}$$



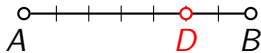
$$\frac{|AD|}{|BD|} = \frac{2}{5} \quad 5 + 2 = 7$$

$$\vec{AD} = \frac{2}{5}\vec{BD}$$



$$\frac{|AD|}{|BD|} = \frac{2}{5} \quad 5 - 2 = 3$$

$$\vec{AD} = -\frac{5}{2}\vec{BD}$$



$$\frac{|AD|}{|BD|} = \frac{5}{2} \quad 5 + 2 = 7$$

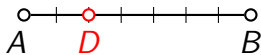
$$\vec{AD} = \frac{5}{2}\vec{BD}$$



$$\frac{|AD|}{|BD|} = \frac{5}{2} \quad 5 - 2 = 3$$


Primjer

$$\vec{AD} = -\frac{2}{5}\vec{BD}$$



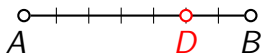
$$\frac{|AD|}{|BD|} = \frac{2}{5} \quad 5 + 2 = 7$$

$$\vec{AD} = \frac{2}{5}\vec{BD}$$




$$\frac{|AD|}{|BD|} = \frac{2}{5} \quad 5 - 2 = 3$$

$$\vec{AD} = -\frac{5}{2}\vec{BD}$$

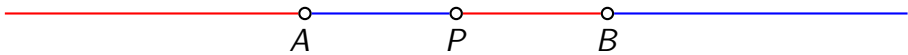


$$\frac{|AD|}{|BD|} = \frac{5}{2} \quad 5 + 2 = 7$$

$$\vec{AD} = \frac{5}{2}\vec{BD}$$



$$\frac{|AD|}{|BD|} = \frac{5}{2} \quad 5 - 2 = 3$$



$$\lambda = 0$$



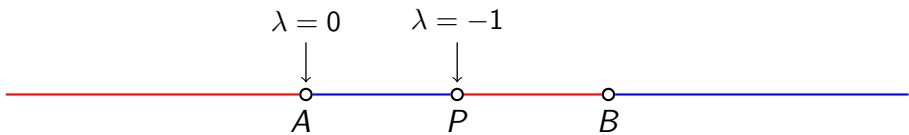
A

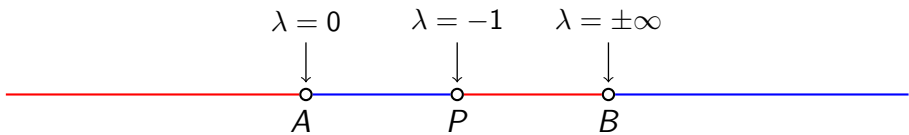



P



B





$$\lambda \in \langle -\infty, -1 \rangle$$


$$\lambda = 0$$

$$\lambda = -1$$

$$\lambda = \pm\infty$$

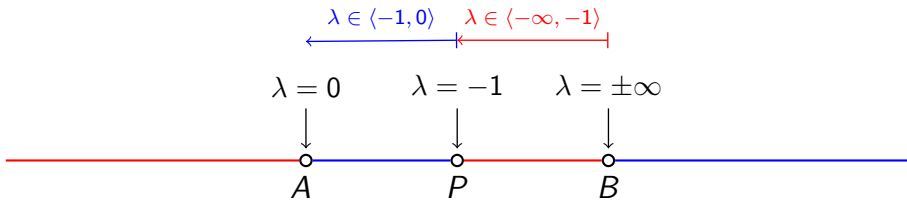


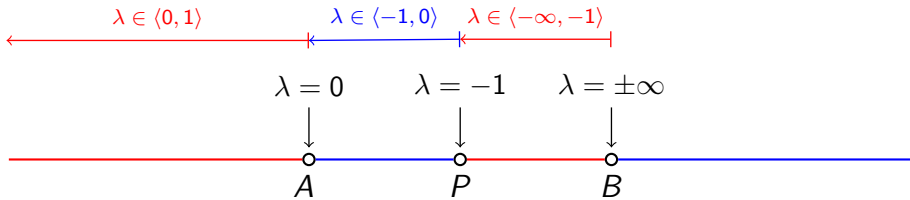
A

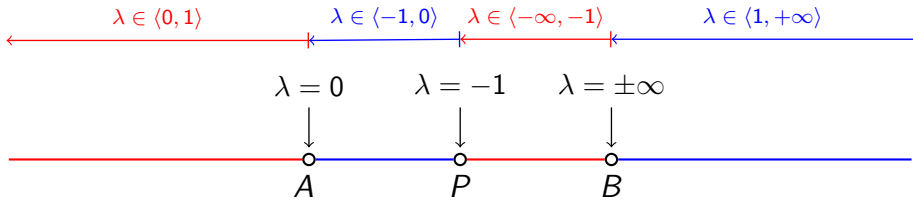
P

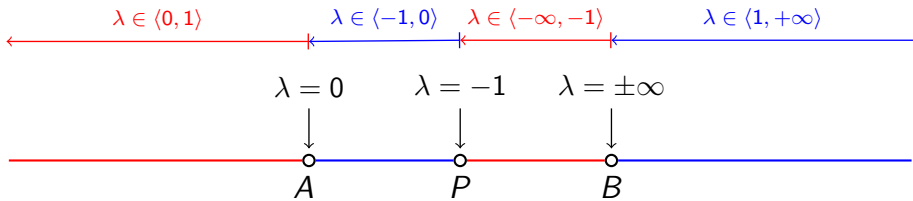
B



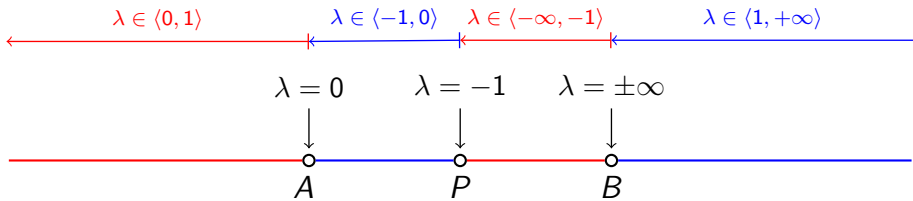




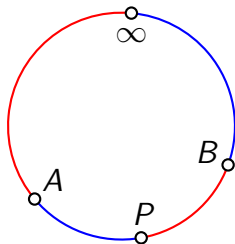


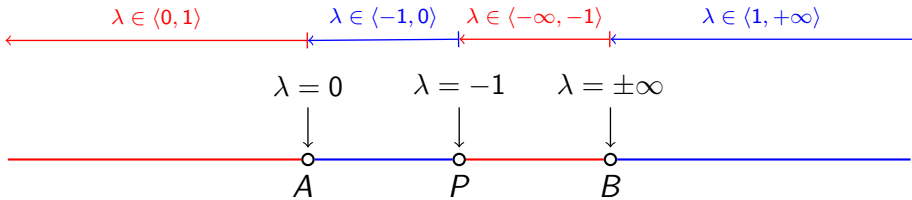


**projektivni
pogled**

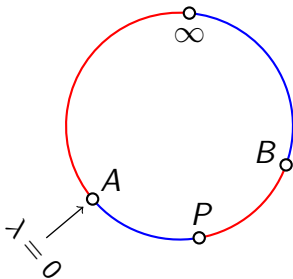


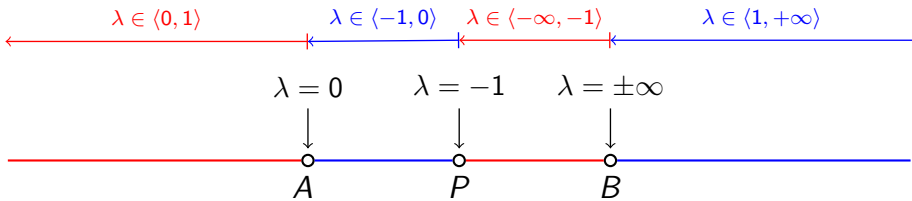
projektivni
pogled



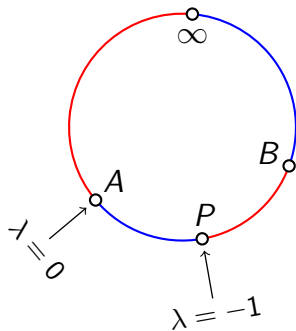


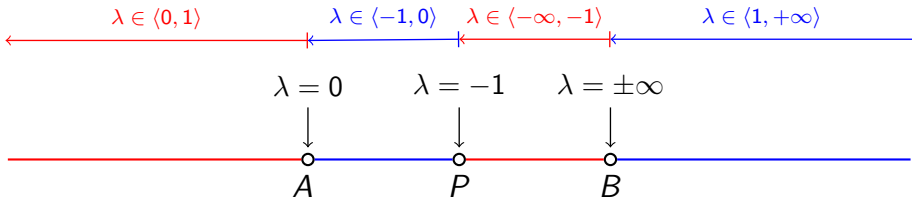
projektivni
pogled



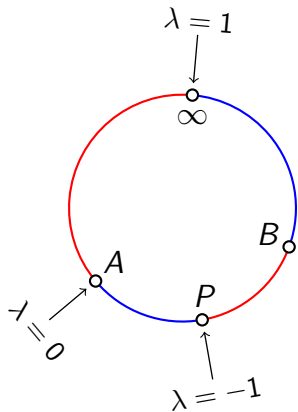


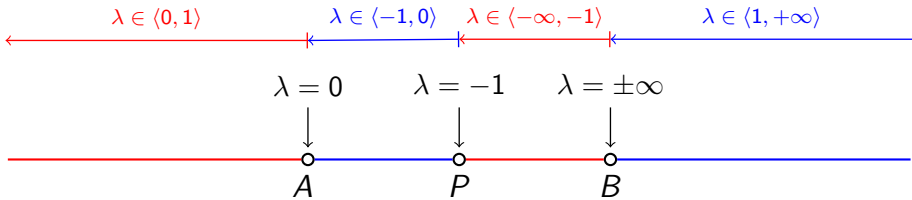
projektivni
pogled



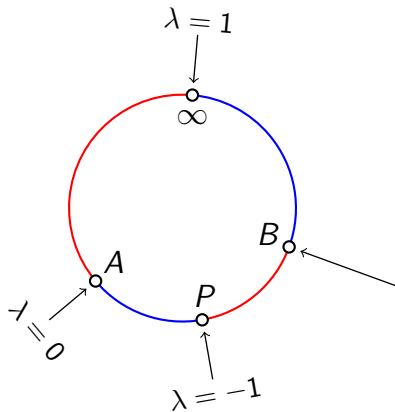


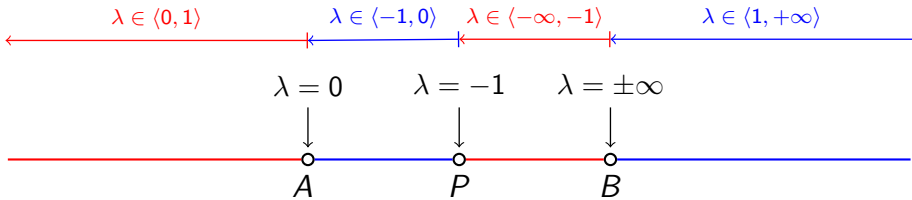
projektivni
pogled



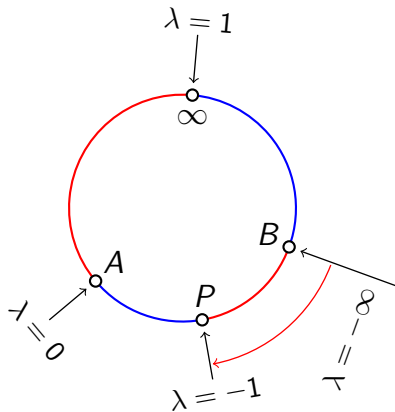


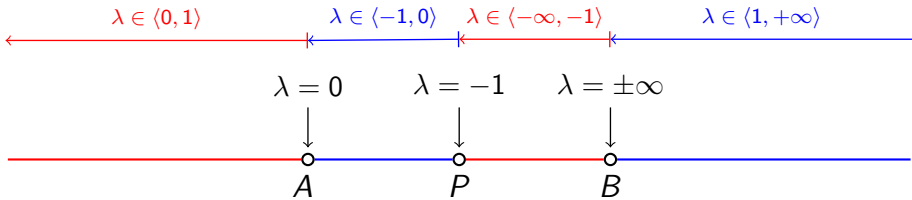
projektivni
pogled



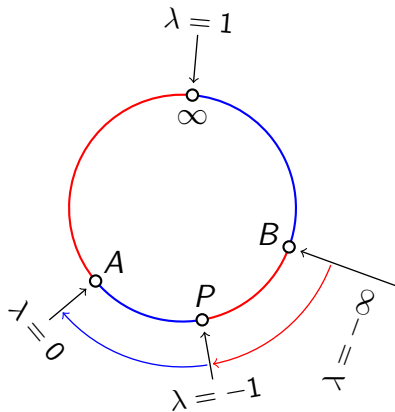


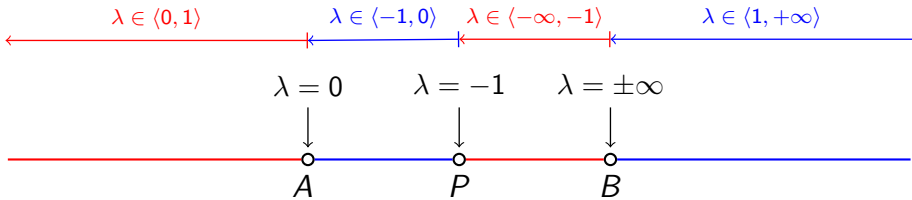
projektivni
pogled



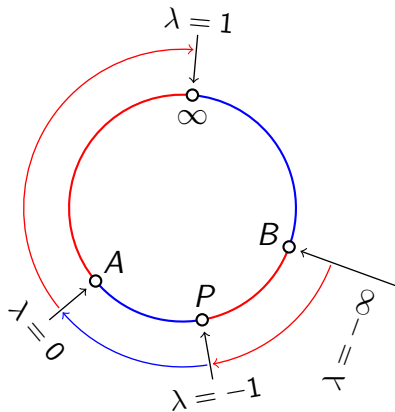


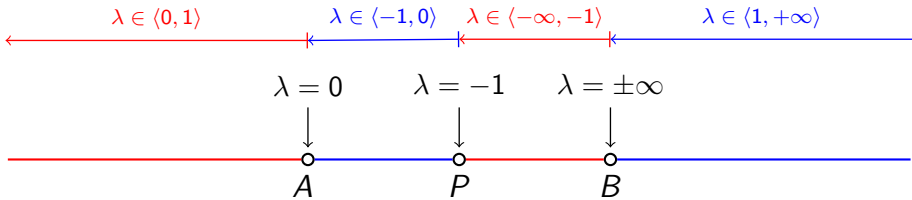
projektivni
pogled





projektivni pogled





projektivni pogled

